

~ | ~

## IYGB - FPL PAPER L - QUESTION 1

THE QUADRATIC IS SYMMETRICAL CONSIDER THE REVOLUTION BY  $2\pi$   
OF HALF THE AREA (OR THE ENTIRE AREA BY  $\pi$ )

$$y = 4 - x^2 = (2-x)(x+2)$$

$$\Rightarrow V = \pi \int_{x_1}^{x_2} [y(x)]^2 dx$$

$$\Rightarrow V = \pi \int_0^2 (4-x^2)^2 dx$$

$$\Rightarrow V = \pi \int_0^2 16 - 8x^2 + x^4 dx$$

$$\Rightarrow V = \pi \left[ 16x - \frac{8}{3}x^3 + \frac{1}{5}x^5 \right]_0^2$$

$$\Rightarrow V = \pi \left[ \left( 32 - \frac{64}{3} + \frac{32}{5} \right) - 0 \right]$$

$$\therefore V = \frac{256}{15} \pi$$

## 1YGB - FPI PAPER L - QUESTION 2

START BY FINDING AN EXPRESSION FOR THE SUM OF THE FIRST  $n$  TERM

(NOTE THAT  $k=1$  YIELDS ZERO)

$$\begin{aligned}\sum_{k=2}^n [(k-1)(k+2)] &= \sum_{k=1}^n [k^2+k-2] \\ &= \sum_{k=1}^n k^2 + \sum_{k=1}^n k - 2 \sum_{k=1}^n 1 \\ &= \frac{1}{6}n(n+1)(2n+1) + \frac{1}{2}n(n+1) - 2 \times n \\ &= \frac{1}{6}n [(n+1)(2n+1) + 3(n+1) - 12] \\ &= \frac{1}{6}n [2n^2 + 3n + 1 + 3n + 3 - 12] \\ &= \frac{1}{6}n (2n^2 + 6n - 8) \\ &= \frac{1}{3}n (n^2 + 3n - 4) \\ &= \frac{1}{3}n(n-1)(n+4)\end{aligned}$$

NOW LETTING  $n=16$

$$\sum_{k=2}^{16} [(k-1)(k+2)] = \frac{1}{3} \times 16 \times 15 \times 20 = \underline{1600}$$

UYGB - FPI PAPER L - QUESTION 3

a) • 
$$\underline{A} = \begin{bmatrix} 0 & 0 & -1 \\ 0 & 1 & 0 \\ 1 & 0 & 0 \end{bmatrix}$$

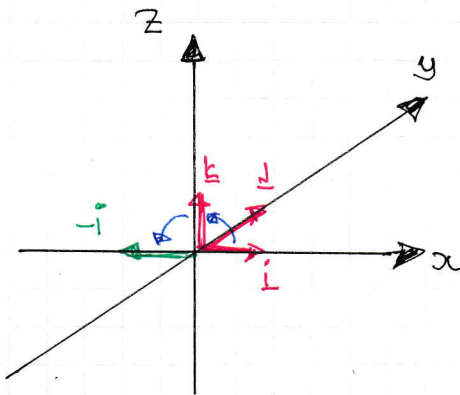
• DETA = 1  
(NO REFLECTION) IS INWARD

$$\underline{i} = \begin{pmatrix} 1 \\ 0 \\ 0 \end{pmatrix} \mapsto \begin{pmatrix} 0 \\ 0 \\ 1 \end{pmatrix} = \underline{k}$$

$$\underline{j} = \begin{pmatrix} 0 \\ 1 \\ 0 \end{pmatrix} \mapsto \begin{pmatrix} 0 \\ 1 \\ 0 \end{pmatrix} = \underline{j}$$

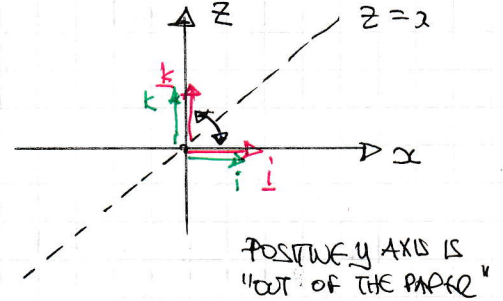
$$\underline{k} = \begin{pmatrix} 0 \\ 0 \\ 1 \end{pmatrix} \mapsto \begin{pmatrix} -1 \\ 0 \\ 0 \end{pmatrix} = -\underline{i}$$

• LOOKING AT THE AXES



• ROTATION BY 90° CLOCKWISE,  
ABOUT THE y AXIS

b) • LOOKING AT THE AXES, FROM  
THE POSITIVE y-AXIS



It 
$$\underline{i} = \begin{pmatrix} 1 \\ 0 \\ 0 \end{pmatrix} \mapsto \begin{pmatrix} 0 \\ 0 \\ 1 \end{pmatrix} = \underline{k}$$

$$\underline{j} = \begin{pmatrix} 0 \\ 1 \\ 0 \end{pmatrix} \mapsto \begin{pmatrix} 0 \\ 1 \\ 0 \end{pmatrix} = \underline{j}$$

$$\underline{k} = \begin{pmatrix} 0 \\ 0 \\ 1 \end{pmatrix} \mapsto \begin{pmatrix} 1 \\ 0 \\ 0 \end{pmatrix} = \underline{i}$$

$$\therefore \underline{B} = \begin{bmatrix} 0 & 0 & 1 \\ 0 & -1 & 0 \\ 1 & 0 & 0 \end{bmatrix}$$

NOTE THAT THE ABOVE SET OF AXES IS IN 2-D, WHERE y IS "OUT OF THE PAPER" - ON ROTATION BY 180°, THE y AXIS WILL BE "INTO THE PLANE OF THE PAPER"

1YG-B - FPI PAPER L - QUESTION 3

c) ● FIND THE MATRIX FOR THE COMPOSITION

$$\underline{C} = \underline{A}\underline{B} = \begin{bmatrix} 0 & 0 & -1 \\ 0 & 1 & 0 \\ 1 & 0 & 0 \end{bmatrix} \begin{bmatrix} 0 & 0 & 1 \\ 0 & -1 & 0 \\ 1 & 0 & 0 \end{bmatrix} = \begin{bmatrix} -1 & 0 & 0 \\ 0 & -1 & 0 \\ 0 & 0 & 1 \end{bmatrix}$$

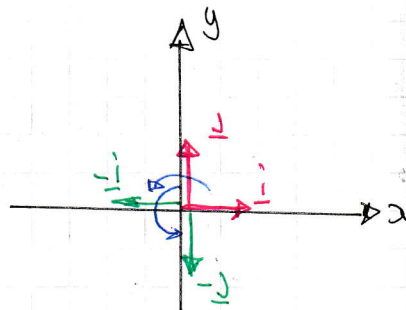
●  $\det \underline{C} = +1$  (NO REFLECTION)

$$\underline{i} = \begin{pmatrix} 1 \\ 0 \\ 0 \end{pmatrix} \mapsto \begin{pmatrix} -1 \\ 0 \\ 0 \end{pmatrix} = -\underline{i}$$

$$\underline{j} = \begin{pmatrix} 0 \\ 1 \\ 0 \end{pmatrix} \mapsto \begin{pmatrix} 0 \\ -1 \\ 0 \end{pmatrix} = -\underline{j}$$

$$\underline{k} = \begin{pmatrix} 0 \\ 0 \\ 1 \end{pmatrix} \mapsto \begin{pmatrix} 0 \\ 0 \\ 1 \end{pmatrix} = \underline{k}$$

● LOOKING AT A SET OF AXES FROM THE POSITIVE Z AXIS, "STICKING OUT OF THE PAPER"



ROTATION ABOUT THE Z AXIS, BY 180°

## YGB - FPL PAPER L - QUESTION 4

START BY WRITING THE EQUATIONS AS A "3 TERM QUADRATIC" IN Z

$$\Rightarrow z^2 - z + 8 + 2(z+1)i = 0$$

$$\Rightarrow z^2 - z + 8 + 2zi + 2i = 0$$

$$\Rightarrow z^2 + (-1+2i)z + (8+2i) = 0$$

USING THE QUADRATIC FORMULA

$$\Rightarrow z = \frac{-(-1+2i) \pm \sqrt{(-1+2i)^2 - 4 \times 1 \times (8+2i)}}{2 \times 1}$$

$$\Rightarrow z = \frac{1-2i \pm \sqrt{1-4i-4-32-8i}}{2}$$

$$\Rightarrow z = \frac{1-2i \pm \sqrt{-35-12i}}{2}$$

NOW WE NEED TO RAWATT THE SQUARE ROOT

$$\Rightarrow (a+bi)^2 \equiv -35-12i$$

$$\Rightarrow a^2 + 2abi - b^2 \equiv -35 - 12i$$

$$\Rightarrow \begin{cases} a^2 - b^2 = -35 \\ ab = -6 \end{cases} \Rightarrow b = \frac{-6}{a}$$

$$\Rightarrow a^2 - \left(\frac{-6}{a}\right)^2 = -35$$

$$\Rightarrow a^2 - \frac{36}{a^2} = -35$$

$$\Rightarrow a^4 - 36 = -35a$$

$$\Rightarrow a^4 + 35a - 36 = 0$$

→

## 1YGB - FPL PAPER 2 - QUESTION 4

$$\Rightarrow (a^2 + 36)(a^2 - 1) = 0$$

$$\Rightarrow a^2 = \begin{cases} -36 \\ 1 \end{cases}$$

$$\Rightarrow a = \begin{cases} 1 \\ -1 \end{cases} \quad b = \frac{-6}{a} = \begin{cases} -6 \\ 6 \end{cases}$$

RETURNING TO THE QUADRATIC FORMULA

$$z = \frac{1-2i \pm (1-6i)}{2}$$

$$z = \begin{cases} \frac{1-2i+1-6i}{2} = \frac{2-8i}{2} = 1-4i \\ \frac{1-2i-1+6i}{2} = \frac{4i}{2} = 2i \end{cases}$$

THE REQUIRED SOLUTIONS ARE

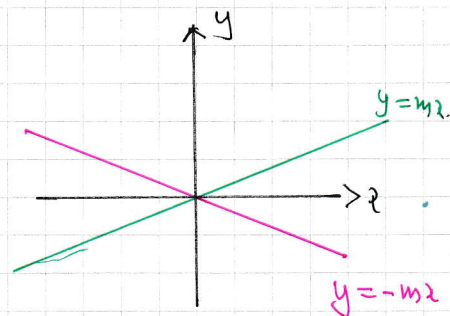
$$\underline{z_1 = 1-4i} \quad \text{OR} \quad \underline{z_2 = 2i}$$

# YGB - FPI PAPER L - QUESTIONS

LET THE REQUIRED LINE HAVE EQUATION  $y = mx$

LOOKING AT THE DIAGRAM THE REFLECTED

LINE WILL HAVE EQUATION  $y = -mx$



$$\Rightarrow \begin{pmatrix} 2 & 1 \\ -6 & 3 \end{pmatrix} \begin{pmatrix} x \\ mx \end{pmatrix} = \begin{pmatrix} X \\ -mX \end{pmatrix}$$

$$\Rightarrow \begin{pmatrix} 2x + mx \\ -6x + 3mx \end{pmatrix} = \begin{pmatrix} X \\ -mX \end{pmatrix}$$

$$\Rightarrow \left. \begin{matrix} 2x + mx = X \\ -6x + 3mx = -mX \end{matrix} \right\} \text{DIVIDING}$$

$$\frac{2+m}{-6+3m} = \frac{1}{-m}$$

$$-6 + 3m = -2m - m^2$$

$$m^2 + 5m - 6 = 0$$

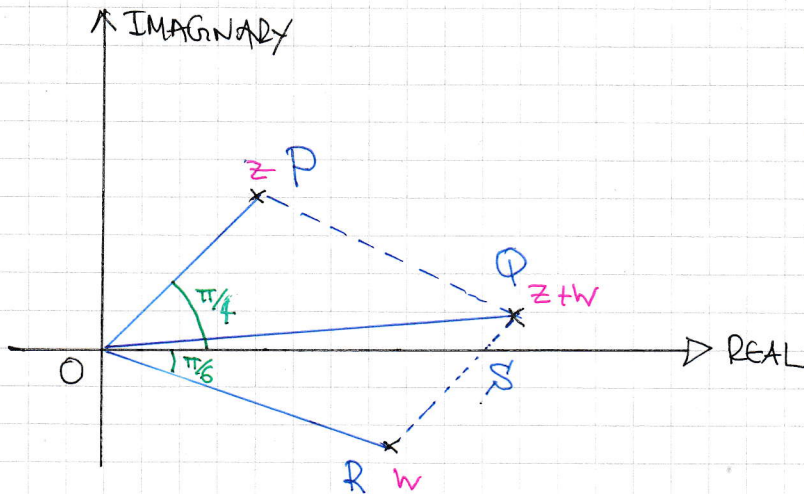
$$(m - 1)(m + 6) = 0$$

$$\therefore m = \begin{matrix} 1 \\ -6 \end{matrix}$$

$$\therefore \underline{y = x \text{ or } y = -6x}$$

# 1YGB - FBI PAPER L - QUESTION 6

## SKETCHING THE REQUIRED POINTS



$$\begin{aligned} z &= \sqrt{2} + \sqrt{2}i \\ w &= \sqrt{3} - i \\ z+w &= (\sqrt{2} + \sqrt{3}) + (\sqrt{2} - 1)i \end{aligned}$$

$$\bullet \arg z = \hat{POS}$$

$$\arctan\left(\frac{\sqrt{2}}{\sqrt{2}}\right) = \hat{POS}$$

$$\hat{POS} = \frac{\pi}{4}$$

$$\bullet |\arg w| = \hat{SOR}$$

$$|\arctan\left(\frac{\sqrt{3}}{-1}\right)| = \hat{SOR}$$

$$\hat{SOR} = \frac{\pi}{6}$$

NOW WE HAVE BY ORDINARY GEOMETRY

$$\hat{POR} = \frac{\pi}{4} + \frac{\pi}{6} = \frac{5\pi}{12}$$

$$\hat{QOR} = \frac{1}{2} \times \frac{5\pi}{12} = \frac{5\pi}{24} \quad (\text{RHOMBUS GEOMETRY})$$

$$\hat{QOS} = \frac{5\pi}{24} - \frac{\pi}{6} = \frac{\pi}{24}$$

THUS THE ANGLE  $\hat{QOS}$  IS THE ARGUMENT OF  $z+w$

$$\Rightarrow \arg(z+w) = \frac{\pi}{24}$$

$$\Rightarrow \arctan\left(\frac{\sqrt{2}-1}{\sqrt{3}+\sqrt{2}}\right) = \frac{\pi}{24}$$

$$\Rightarrow \tan\frac{\pi}{24} = \frac{\sqrt{2}-1}{\sqrt{3}+\sqrt{2}}$$

$$\Rightarrow \tan\frac{\pi}{24} = \frac{(\sqrt{2}-1)(\sqrt{3}-\sqrt{2})}{(\sqrt{3}+\sqrt{2})(\sqrt{3}-\sqrt{2})}$$

$$\Rightarrow \tan\frac{\pi}{24} = \frac{\sqrt{6}-2-\sqrt{3}+\sqrt{2}}{3-2}$$

$$\therefore \tan\frac{\pi}{24} = \sqrt{6}-\sqrt{3}+\sqrt{2}-2$$



- 1 -

## YCB - FPI PAPER L - QUESTION 7

IF  $ax^3 + bx^2 + cx + d = 0$

•  $\alpha + \beta + \gamma = -\frac{b}{a}$  — I

•  $\alpha\beta + \beta\gamma + \gamma\alpha = \frac{c}{a}$  — II

•  $\alpha\beta\gamma = -\frac{d}{a}$  — III

BUT TWO ROOTS, WITHOUT LOSS OF GENERALITY  $\alpha$  &  $\beta$  MULTIPLY TO 1

(III)  $\alpha\beta\gamma = -\frac{d}{a}$   
 $\gamma = -\frac{d}{a}$

SUBSTITUTE INTO II & I

•  $\alpha + \beta - \frac{d}{a} = -\frac{b}{a}$

$\alpha + \beta = \frac{d-b}{a}$

•  $1 + \gamma(\alpha + \beta) = \frac{c}{a}$

$1 + \left(-\frac{d}{a}\right)(\alpha + \beta) = \frac{c}{a}$

COMBINING WE OBTAIN

$$1 - \frac{d}{a} \left( \frac{d-b}{a} \right) = \frac{c}{a}$$

$$1 - \frac{d(d-b)}{a^2} = \frac{c}{a}$$

$$a^2 - d(d-b) = ca$$

$$a^2 - d^2 + bd = ac$$

$$\underline{a^2 - d^2 = ac - bd}$$

AS REQUIRED

# YGB - FPI PAPER L - QUESTION 8

ESTABLISH A BASE CASE

$$\begin{aligned} \text{LHS} &= \sum_{r=1}^1 \frac{3r+2}{r(r+1)(r+2)} = \frac{3 \times 1 + 2}{1 \times 2 \times 3} = \frac{5}{6} \\ \text{RHS} &= \frac{1 \times (2 \times 1 + 3)}{2 \times 3} = \frac{1 \times 5}{6} = \frac{5}{6} \end{aligned} \quad \left. \vphantom{\begin{aligned} \text{LHS} \\ \text{RHS} \end{aligned}} \right\} \text{THE RESULT HOLDS FOR } n=1$$

SUPPOSE THAT THE RESULT HOLDS FOR } n=k \in \mathbb{N}

$$\begin{aligned} \Rightarrow \sum_{r=1}^k \frac{3r+2}{r(r+1)(r+2)} &= \frac{k(2k+3)}{(k+1)(k+2)} \\ \Rightarrow \sum_{r=1}^{k+1} \frac{3r+2}{r(r+1)(r+2)} &= \frac{k(2k+3)}{(k+1)(k+2)} + \frac{3(k+1)+2}{(k+1)(k+2)(k+3)} \quad \leftarrow (k+1)^{\text{th}} \text{ TERM} \\ \Rightarrow \sum_{r=1}^{k+1} \frac{3r+2}{r(r+1)(r+2)} &= \frac{k(2k+3)}{(k+1)(k+2)} + \frac{3k+5}{(k+1)(k+2)(k+3)} \\ \Rightarrow \sum_{r=1}^{k+1} \frac{3r+2}{r(r+1)(r+2)} &= \frac{k(2k+3)(k+3) + (3k+5)}{(k+1)(k+2)(k+3)} \\ \Rightarrow \sum_{r=1}^{k+1} \frac{3r+2}{r(r+1)(r+2)} &= \frac{2k^3 + 9k^2 + 9k + 3k + 5}{(k+1)(k+2)(k+3)} \\ \Rightarrow \sum_{r=1}^{k+1} \frac{3r+2}{r(r+1)(r+2)} &= \frac{2k^3 + 9k^2 + 12k + 5}{(k+1)(k+2)(k+3)} \end{aligned}$$

NOW WE "EXPECT" THAT (k+1) IS A FACTOR FOR THE INDUCTION TO WORK

$$\begin{aligned} \Rightarrow \sum_{r=1}^{k+1} \frac{3r+2}{r(r+1)(r+2)} &= \frac{2k^2(k+1) + 7k(k+1) + 5(k+1)}{(k+1)(k+2)(k+3)} \\ \Rightarrow \sum_{r=1}^{k+1} \frac{3r+2}{r(r+1)(r+2)} &= \frac{(k+1)(2k^2 + 7k + 5)}{(k+1)(k+2)(k+3)} \end{aligned}$$

1YGB - FBI PAPER L - QUESTION 8

$$\Rightarrow \sum_{r=1}^k \frac{3r+2}{r(r+1)(r+2)} = \frac{2k^2+7k+5}{(k+2)(k+3)}$$

$$\Rightarrow \sum_{r=1}^k \frac{3r+2}{r(r+1)(r+2)} = \frac{(2k+5)(k+1)}{(k+2)(k+3)}$$

$$\Rightarrow \sum_{r=1}^{k+1} \frac{3r+2}{r(r+1)(r+2)} = \frac{(k+1)[2(k+1)+3]}{[(k+1)+1][(k+1)+2]}$$

IF THE RESULT HOLDS FOR  $n=k \in \mathbb{N}$ , THEN IT MUST ALSO HOLD FOR  $n=k+1$

SINCE THE RESULT HOLDS FOR  $n=1$ , THEN IT MUST HOLD FOR ALL  $n$

- 1 -

## 1YGB - FPI PAPER 1 - QUESTION 9

a) WRITING THE EQUATIONS OF THE LINES IN PARAMETRIC

$$L_1 = (5, 3, 1) + \lambda(1, 1, 1) = (\lambda+5, \lambda+3, \lambda+1)$$

$$L_2 = (-3, 4, 8) + \mu(2, -1, -3) = (2\mu-3, 4-\mu, 8-3\mu)$$

EQUATE  $\hat{i}$  &  $\hat{j}$  COMPONENTS

$$\hat{i}: \lambda+5 = 2\mu-3$$

$$\hat{j}: \lambda+3 = 4-\mu$$

SUBTRACTING  $\Rightarrow 2 = 3\mu - 7$

$$\Rightarrow \mu = 3$$

$$\Rightarrow \underline{\mu = 3}$$

$$\Rightarrow \lambda+3 = 4-3$$

$$\Rightarrow \underline{\lambda = -2}$$

CHECKING  $\hat{k}$

- $\lambda+1 = -2+1 = -1$

- $8-3\mu = 8-3 \times 3 = -1$

AS ALL 3 COMPONENTS AGREE WITH  $\lambda = -2$  &  $\mu = 3$ , THE LINES INTERSECT AT SOME POINT

USING  $\lambda = -2$  OR  $\mu = 3$  WE OBTAIN

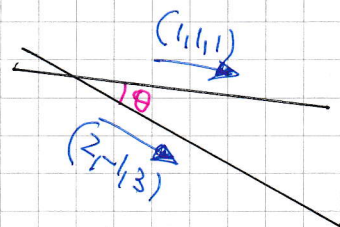
$$\underline{P(3, 1, -1)}$$

b) DOTTING THE DIRECTION VECTORS

$$\Rightarrow (1, 1, 1) \cdot (2, -1, -3) = |1, 1, 1| |2, -1, -3| \cos \theta$$

$$\Rightarrow 2-1-3 = \sqrt{1+1+1} \sqrt{4+1+9} \cos \theta$$

$$\Rightarrow -2 = \sqrt{3} \sqrt{14} \cos \theta$$



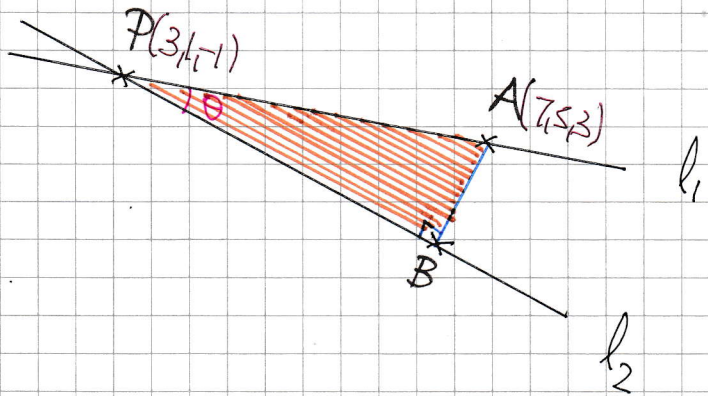
1VGB - FPI PAPER L - QUESTION 9

$$\Rightarrow -\frac{2}{\sqrt{42}} = \cos\theta$$

$$\Rightarrow \theta \approx 107.9752838\dots$$

$\therefore$  ACUTE ANGLE  $\approx 72.0^\circ$

c) START WITH A DIAGRAM



•  $|\vec{AP}| = |P - A| = |(3, 1, -1) - (7, 5, 3)| = |-4, -4, -4| = \sqrt{16+16+16} = \sqrt{48}$

•  $|AB| = |AP| \sin\theta$

•  $|PB| = |AP| \cos\theta$

•  $Area = \frac{1}{2} |AB| |PB| = \frac{1}{2} |AP| \sin\theta \times |AP| \cos\theta$

$$= \frac{1}{4} |AP|^2 \sin 2\theta$$

$$= \frac{1}{4} \times 48 \times \sin(2 \times 72.0^\circ)$$

$$= 7.045044575\dots$$

$\approx 7.05$