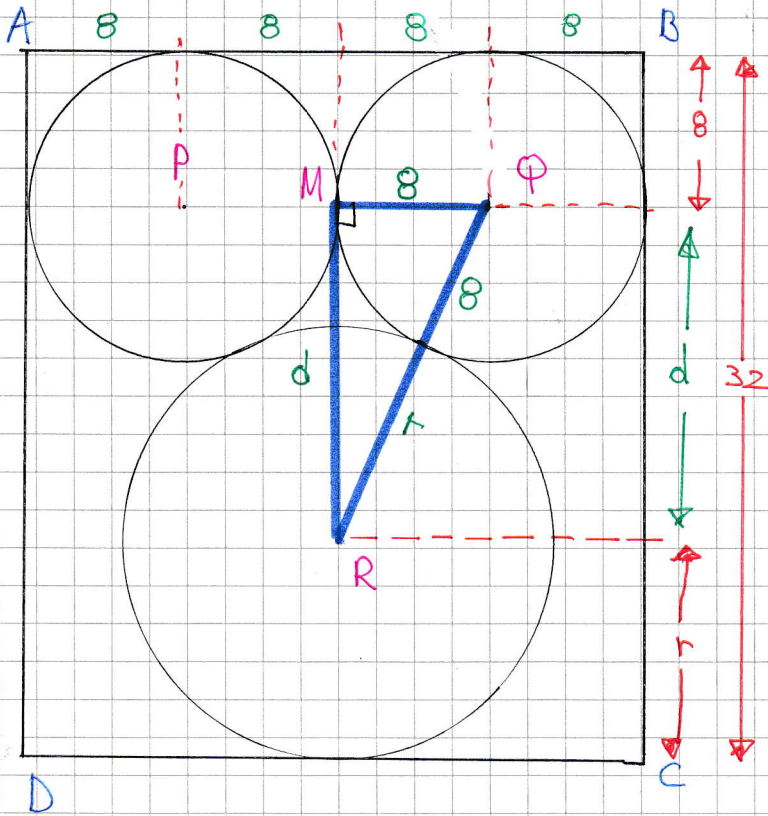


- 1 -

IYGB - MPI PAPER 5 - QUESTION 1

LOOKING AT THE DIAGRAM



$$\begin{aligned} d &= 32 - 8 - r \\ d &= 24 - r \end{aligned}$$

BY PYTHAGORAS

$$|MQ|^2 + |MR|^2 = |QR|^2$$

$$8^2 + d^2 = (8+r)^2$$

$$64 + (24-r)^2 = (8+r)^2$$

$$\cancel{64} + 576 - 48r + r^2 = \cancel{64} + 16r + r^2$$

$$576 = 64r$$

$$\underline{r = 9}$$

IYGB - MPI PAPER 5 - QUESTION 2

$$f(x) = 2^{ax} + b, x \in \mathbb{R}$$

● USING $f(2) = \frac{5}{2}$

$$\Rightarrow 2^{a \times 2} + b = \frac{5}{2}$$

$$\Rightarrow 2^{2a} + b = \frac{5}{2}$$

$$\Rightarrow \underline{b = \frac{5}{2} - 2^{2a}}$$

● USING $f(-2) = 4$

$$\Rightarrow 2^{a(-2)} + b = 4$$

$$\Rightarrow 2^{-2a} + b = 4$$

$$\Rightarrow \underline{b = 4 - 2^{-2a}}$$

● SOLVING SIMULTANEOUSLY

$$\Rightarrow 4 - 2^{-2a} = \frac{5}{2} - 2^{2a}$$

$$\Rightarrow 4 - \frac{1}{2^{2a}} = \frac{5}{2} - 2^{2a}$$

$$\Rightarrow 4 - \frac{1}{A} = \frac{5}{2} - A \quad (A = 2^{2a})$$

$$\Rightarrow 4A - 1 = \frac{5}{2}A - A^2$$

$$\Rightarrow 8A - 2 = 5A - 2A^2$$

$$\Rightarrow 2A^2 + 3A - 2 = 0$$

$$\Rightarrow (2A - 1)(A + 2) = 0$$

$$\Rightarrow A = \begin{cases} \frac{1}{2} \\ -2 \end{cases}$$

LYGB - MPI PAPER 5 - QUESTION 2

$$\Rightarrow 2^{2a} = \frac{1}{2}$$

$$\Rightarrow 2^{2a} = 2^{-1}$$

$$\Rightarrow 2a = -1$$

$$\Rightarrow \underline{a = -\frac{1}{2}}$$

● Q USING FINALLY $b = 4 - 2^{-2a}$

$$\Rightarrow b = 4 - 2^{-2(-\frac{1}{2})}$$

$$\Rightarrow b = 4 - 2^1$$

$$\Rightarrow \underline{b = 2}$$

YGB - MPI PAPER § - QUESTION 3

APPLY THE DEFINITION OF A COMBINATION

$$\binom{n}{m} \binom{n-m}{r-m} = \frac{n!}{m! (n-m)!} \times \frac{(n-m)!}{(r-m)! [(n-m)-(r-m)]!}$$

$$= \frac{n!}{m! (n-m)!} \times \frac{(n-m)!}{(r-m)! (n-r)!}$$

$$= \frac{n!}{m!} \times \frac{1}{(r-m)! (n-r)!}$$

$$= \frac{n!}{m! (r-m)! (n-r)!}$$

$$= \frac{n! r!}{m! (r-m)! (n-r)! r!}$$

$$= \frac{n!}{r! (n-r)!} \times \frac{r!}{m! (r-m)!}$$

$$= \underline{\binom{n}{r} \binom{r}{m}}$$

~~A REPURRO~~

1YGB - MPI PAPER 5 - QUESTION 4

TREATING A POINT ON l AS A locus - let $C(k, h)$ so C must lie ON THE PERPENDICULAR BISECTOR OF AB SO EQUIDISTANT FROM A & B

$$A(3, 2)$$

$$B(7, 8)$$

$$C(k, h)$$

- $|AC|^2 = (k-3)^2 + (h-2)^2$
- $|BC|^2 = (k-7)^2 + (h-8)^2$

THUS WE HAVE

$$(k-3)^2 + (h-2)^2 = (k-7)^2 + (h-8)^2$$

$$\cancel{k^2} - 6k + 9 + \cancel{h^2} - 4h + 4 = \cancel{k^2} - 14k + 49 + \cancel{h^2} - 16h + 64$$

$$-6k - 4h + 13 = -14k - 16h + 113$$

$$8k + 12h = 100$$

$$2k + 3h = 25$$

SOLVING SIMULTANEOUSLY WITH $|AC|^2 = 26$

$$(k-3)^2 + (h-2)^2 = 26$$

$$2k + 3h = 25$$

$$\left. \begin{array}{l} (k-3)^2 + (h-2)^2 = 26 \\ 2k + 3h = 25 \end{array} \right\} \Rightarrow 4(k-3)^2 + 4(h-2)^2 = 104$$

$$\Rightarrow (2k-6)^2 + (2h-4)^2 = 104$$

$$\Rightarrow [(25-3h)-6]^2 + (2h-4)^2 = 104$$

$$\Rightarrow (19-3h)^2 + (2h-4)^2 = 104$$

$$\Rightarrow \begin{pmatrix} 361 - 114h + 9h^2 \\ 16 - 16h + 4h^2 \end{pmatrix} = 104$$

$$\Rightarrow 13h^2 - 130h + 377 = 104$$

$$\Rightarrow 13h^2 - 130h + 273 = 0$$

$$\Rightarrow h^2 - 10h + 21 = 0 \quad \left. \begin{array}{l} \\ \\ \end{array} \right\} \div 13$$

$$\Rightarrow (h-3)(h-7) = 0$$

$$h = 3 \quad (2 < h < 5)$$

$$k = 8 \quad (\text{using } 2k + 3h = 25)$$

- 2 -

LYOB - MPI PAPER 2 - QUESTION 4

FINALLY THE EQUATION OF l IS THE WAY FOUND IN x & y

i.e. $2k + 3h = 25$

$2x + 3y = 25$

A GEOMETRIC APPROACH IS ALSO POSSIBLE

e.g. • GRAD $AB = \frac{y_2 - y_1}{x_2 - x_1} = \frac{8 - 2}{7 - 3} = \frac{6}{4} = \frac{3}{2}$

• GRAD OF l MUST BE $-\frac{2}{3}$

• MIDPOINT OF AB MUST BE $M\left(\frac{7+3}{2}, \frac{8+2}{2}\right) = M(5, 5)$

• EQUATION OF l MUST BE $y - y_0 = m(x - x_0)$

$$y - 5 = -\frac{2}{3}(x - 5)$$

$$3y - 15 = -2x + 10$$

$$2x + 3y = 25$$

THEN SOLVE SIMULTANEOUS EQUATIONS

$|AC|$ or $|BC|$ IS $\sqrt{26}$

g

$$2k + 3h = 25$$

YGB - MPI PAPER 5 - QUESTION 5

FIRSTLY WE REQUIRE TO FIND THE CO-ORDINATES OF THE POINT OF TANGENCY

METHOD A (PARAMETRIC APPROACH)

- LET THE COORDINATES OF P BE $(a, a^2 - 3a + 18)$, FOR SOME $a > 0$

- THEN WE HAVE

$$\Rightarrow \frac{dy}{dx} = 2x - 3$$

$$\Rightarrow \left. \frac{dy}{dx} \right|_{x=a} = 2a - 3$$

- EQUATION OF THE TANGENT AT P WILL BE

$$\Rightarrow y - (a^2 - 3a + 18) = (2a - 3)(x - a)$$

- AS THE TANGENT PASSES THROUGH $(1, 0)$ WE HAVE

$$\Rightarrow -(a^2 - 3a + 18) = (2a - 3)(1 - a)$$

$$\Rightarrow a^2 - 3a + 18 = (2a - 3)(a - 1)$$

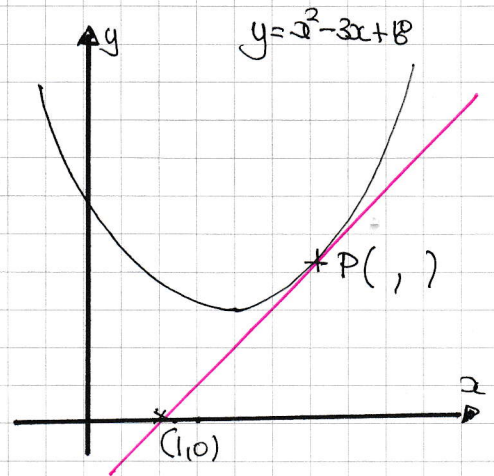
$$\Rightarrow a^2 - 3a + 18 = 2a^2 - 5a + 3$$

$$\Rightarrow 0 = a^2 - 2a - 15$$

$$\Rightarrow (a + 3)(a - 5) = 0$$

$$\Rightarrow a = \begin{matrix} \swarrow \\ 5 \end{matrix}$$

$$\in P(5, 28)$$



METHOD B (DISCRIMINANT APPROACH)

- LET THE EQUATION OF THE TANGENT BE $y = mx + c$
- USING THE CONSTRAINT $(1, 0)$ WE HAVE $0 = m + c$
- SOLVING SIMULTANEOUSLY

$$\left. \begin{matrix} y = x^2 - 3x + 18 \\ y = mx + c \end{matrix} \right\} \Rightarrow \left. \begin{matrix} y = x^2 - 3x + 18 \\ y = m \cdot -m \end{matrix} \right\} \Rightarrow \begin{matrix} x^2 - 3x + 18 = mx - m \\ x^2 - (3+m)x + (m+18) = 0 \end{matrix}$$

LOOKING FOR REPEATED ROOTS

IYGB - MPI PAPER 5 - QUESTION 5

$$\Rightarrow [-(3+m)]^2 - 4 \times 1 \times (m+18) = 0$$

$$\Rightarrow m^2 + 6m + 9 - 4m - 72 = 0$$

$$\Rightarrow m^2 + 2m - 63 = 0$$

$$\Rightarrow (m-7)(m+9) = 0$$

$$\Rightarrow m = \begin{cases} 7 \\ -9 \end{cases} \quad \text{(POSITIVE GRADIENT)}$$

• Hence we have

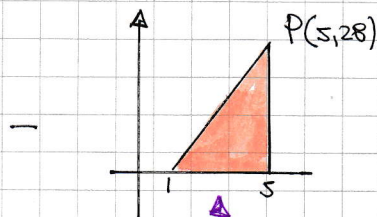
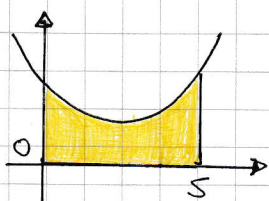
$$x^2 - (3+m)x + (m+18) = 0$$

$$x^2 - 10x + 25 = 0$$

$$(x-5)^2 = 0$$

$$x=5 \text{ \& } y=28 \text{ At B fford}$$

• Now we have



= Required Area

$$\frac{1}{2} \times 4 \times 28 = 56$$

$$\int_0^5 x^2 - 3x + 18 \, dx = \left[\frac{1}{3}x^3 - \frac{3}{2}x^2 + 18x \right]_0^5 = \left(\frac{125}{3} - \frac{75}{2} + 90 \right) - (0) = \frac{565}{6}$$

• THE REQUIRED AREA IS

$$\frac{565}{6} - 56 = \frac{229}{6}$$

- 1 -

1YGB - MPI PAPER 2 - QUESTION 6

$$\frac{4\sqrt{2} - 3\sqrt{3} - 1}{1 - 2\sqrt{2} + \sqrt{3}} = \frac{(4\sqrt{2} - 3\sqrt{3} - 1)[1 - 2\sqrt{2} - \sqrt{3}]}{[(1 - 2\sqrt{2}) + \sqrt{3}][(1 - 2\sqrt{2}) - \sqrt{3}]}$$
$$= \frac{(4\sqrt{2} - 3\sqrt{3} - 1)(1 - 2\sqrt{2} - \sqrt{3})}{(1 - 2\sqrt{2})^2 - (\sqrt{3})^2} \quad \leftarrow 1 - 4\sqrt{2} + 8 - 3 = 6 - 4\sqrt{2}$$

NOW MULTIPLYING & TIDYING UP THE NUMERATOR

$$\begin{array}{r} \dots = 4\sqrt{2} - 16 - 4\sqrt{6} - 3\sqrt{3} \\ \quad 2\sqrt{2} + 9 + 6\sqrt{6} + \sqrt{3} \\ \quad \quad \quad - 1 \\ \hline \end{array}$$

$$\dots = \frac{6\sqrt{2} + 2\sqrt{6} - 2\sqrt{3} - 8}{6 - 4\sqrt{2}} = \frac{3\sqrt{2} + \sqrt{6} - \sqrt{3} - 4}{3 - 2\sqrt{2}}$$

RATIONALIZING ONCE MORE

$$= \frac{(3 + 2\sqrt{2})(3\sqrt{2} + \sqrt{6} - \sqrt{3} - 4)}{(3 + 2\sqrt{2})(3 - 2\sqrt{2})} \quad \leftarrow 9 - 8 = 1$$

TIDY THE NUMERATOR

$$\begin{array}{r} \dots 9\sqrt{2} + 3\sqrt{6} - 3\sqrt{3} - 12 \\ \quad - 8\sqrt{2} - 2\sqrt{6} + 2\sqrt{2} + 12 \\ \hline \quad \quad \quad \sqrt{2} + \sqrt{6} + \sqrt{3} \end{array}$$

$$\dots = \frac{\sqrt{6} + \sqrt{3} + \sqrt{2}}{1} = \underline{\underline{\sqrt{6} + \sqrt{3} + \sqrt{2}}}$$

IXGB - MPI PAGE 5 - QUESTION 7

AS B LIES ON THE LINE $y=x$, LET $B(t,t)$

● GRADIENT "AB" = $\frac{t-6}{t-0} = \frac{t-6}{t}$

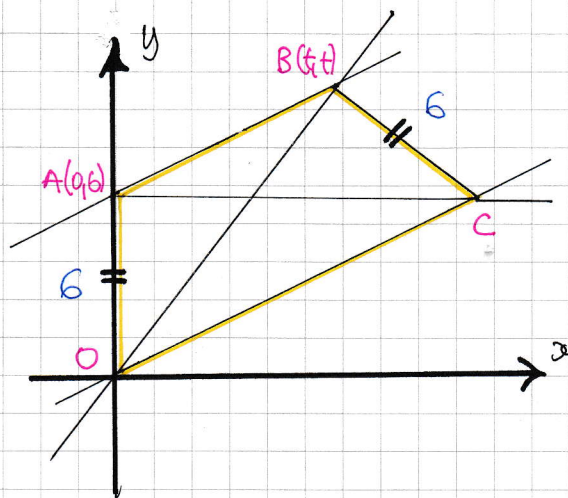
● EQUATION OF "OC" (PARALLEL TO "AB")

$$y = \frac{t-6}{t}x$$

● AS "AC" IS HORIZONTAL, $y=6$

$$6 = \frac{t-6}{t}x$$

$$x = \frac{6t}{t-6}$$



● DISTANCE BC MUST BE 6, $B(t,t)$, $C\left(\frac{6t}{t-6}, 6\right)$

$$\sqrt{\left(\frac{6t}{t-6} - t\right)^2 + (6-t)^2} = 6$$

SOLVING THE ABOVE EQUATION

$$\Rightarrow \left(\frac{6t}{t-6} - t\right)^2 + (6-t)^2 = 36$$

$$\Rightarrow \left[\frac{6t - t(t-6)}{t-6}\right]^2 + (t-6)^2 = 36$$

$$\Rightarrow \left[\frac{12t - t^2}{t-6}\right]^2 + (t-6)^2 = 36$$

$$\Rightarrow \frac{t^2(12-t)^2}{(t-6)^2} + (t-6)^2 = 36$$

$$\Rightarrow t^2(t-12)^2 + (t-6)^4 = 36(t-6)^2$$

1YGB - NPI PAPER 5 - QUESTION 7

SOLVING BY A SUBSTITUTION FOR SIMPLICITY, LET $w = t - 6$

$$\Rightarrow (w+6)^2 (w-6)^2 + w^4 = 36w^2$$

$$\Rightarrow (w^2 - 36)^2 + w^4 = 36w^2$$

$$\Rightarrow w^4 - 72w^2 + 1296 + w^4 - 36w^2 = 0$$

$$\Rightarrow 2w^4 - 108w^2 + 1296 = 0$$

$$\Rightarrow w^4 - 54w^2 + 648 = 0$$

BY QUADRATIC FORMULA, COMPLETING THE SQUARE, OR FACTORIZATION

$$\Rightarrow (w^2 - 36)(w^2 - 18) = 0$$

$$\Rightarrow w^2 = \begin{cases} 36 \\ 18 \end{cases}$$

$$\Rightarrow w = \begin{cases} 6 \\ -6 \\ 3\sqrt{2} \\ -3\sqrt{2} \end{cases}$$

$$t - 6 = \begin{cases} 6 \\ -6 \\ 3\sqrt{2} \\ -3\sqrt{2} \end{cases}$$

$$\Rightarrow t = \begin{cases} 12 \\ \cancel{0} \\ 6 + 3\sqrt{2} \\ \cancel{6 - 3\sqrt{2}} \end{cases}$$

$t > 6$ DUE TO POINT C

$t > 6$ DUE TO POINT C

NOW WE HAVE TO CHECK AGAINST THE x COORDINATE OF C

● IF $B(12, 12) \Rightarrow x_c = \frac{6t}{t-6} = \frac{6 \times 12}{12-6} = \frac{72}{6} = \cancel{12}$

(AS THIS YIELDS A PARALLELGRAM)

● IF $B(6+3\sqrt{2}, 6+3\sqrt{2}) \Rightarrow x_c = \frac{6(6+3\sqrt{2})}{6+3\sqrt{2}-6} = \frac{6(6+3\sqrt{2})}{3\sqrt{2}} = \frac{12+6\sqrt{2}}{\sqrt{2}} = 6+6\sqrt{2}$

WHICH IS OK

IYGB - M1 PAPER 5 - QUESTION 8

$$(19 + 2\sin^2 2\theta) \tan 2\theta = \frac{3}{\cos 2\theta} - 17\cos 2\theta$$

- START MANIPULATING THE EQUATION BY SWITCHING THE $\tan 2\theta$ INTO SINES AND COSINES AND THEN GETTING RID OF THE DENOMINATORS

$$\Rightarrow (19 + 2\sin^2 2\theta) \times \frac{\sin 2\theta}{\cos 2\theta} = \frac{3}{\cos 2\theta} - 17\cos 2\theta$$

$$\Rightarrow (19 + 2\sin^2 2\theta) \times \sin 2\theta = 3 - 17\cos^2 2\theta \quad \leftarrow \times \cos 2\theta$$

$$\Rightarrow (19 + 2\sin^2 2\theta) \sin 2\theta = 3 - 17(1 - \sin^2 2\theta)$$

$$\Rightarrow 19\sin 2\theta + 2\sin^3 2\theta = -14 + 17\sin^2 2\theta$$

$$\Rightarrow 2\sin^3 2\theta - 17\sin^2 2\theta + 19\sin 2\theta + 14 = 0$$

- THIS IS A CUBIC IN $\sin 2\theta$, SO LOOK FOR SOME POSSIBLE UNGAP FACTORS

$$\underline{\underline{f(x) = 2x^3 - 17x^2 + 19x + 14}}$$

- $f(1) = 2 - 17 + 19 + 14 \neq 0$
- $f(-1) = -2 - 17 - 19 + 14 \neq 0$
- $f(2) = 16 - 68 + 38 + 14 = 0$

∴ $(x-2)$ IS A FACTOR

1YGB - MPI PAPER 5 - QUESTION 8

- FACTORIZE THE CUBIC BY USING LONG DIVISION, INSPECTION OR ANY OTHER SENSIBLE METHOD

$$\begin{aligned} f(x) &= 2x^3 - 17x^2 + 19x + 14 \\ &= 2x^2(x-2) - 13x(x-2) - 7(x-2) \\ &= (x-2)(2x^2 - 13x - 7) \\ &= (x-2)(2x+1)(x-7) \end{aligned}$$

$$\therefore f(x) = 0 \Rightarrow x = \begin{cases} 2 \\ 7 \\ -\frac{1}{2} \end{cases}$$

$$f(\sin 2\theta) = 0 \Rightarrow \sin 2\theta = \begin{cases} 2 \\ 7 \\ -\frac{1}{2} \end{cases}$$

- SOLVING THE EQUATION $\sin 2\theta = -\frac{1}{2}$ FOR $0 \leq \theta < 360^\circ$

$$\Rightarrow \arcsin\left(-\frac{1}{2}\right) = -30^\circ$$

$$\Rightarrow \begin{cases} 2\theta = -30^\circ \pm 360n \\ 2\theta = 210^\circ \pm 360n \end{cases} \quad n=0,1,2,3,\dots$$

$$\Rightarrow \begin{cases} \theta = -15^\circ \pm 180n \\ \theta = 105^\circ \pm 180n \end{cases}$$

$$\Rightarrow \theta = 165^\circ, 345^\circ, 105^\circ, 285^\circ$$

$$\Rightarrow \underline{\theta = 105^\circ, 165^\circ, 285^\circ, 345^\circ}$$

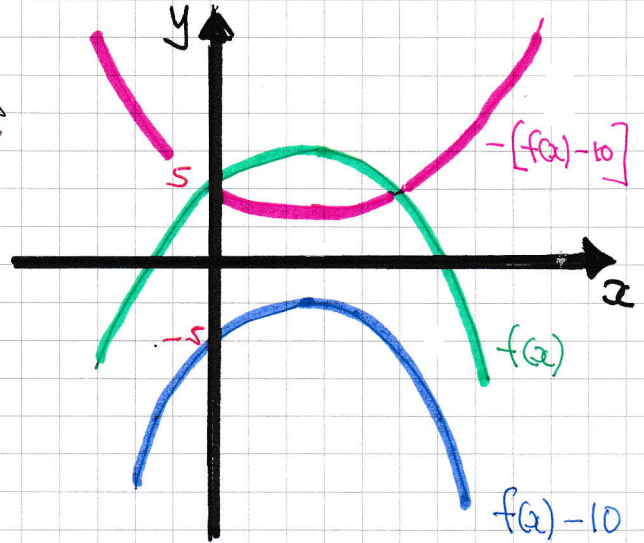
- 1 -

LYGB - M1 PAPER 5 - QUESTION 9

FIRSTLY, BY INSPECTION, THE y INTERCEPT OF $f(x)$ IS 5,
BY SETTING $x=0$

THEN WE TRANSFORM AS FOLLOWS

- TRANSLATE $f(x)$, "DOWN"
BY 10 UNITS, I.E ONTO
THE "BLUE" GRAPH $f(x)-10$
- THEN REFLECT THE GRAPH OF
 $f(x)-10$ ABOUT THE x AXIS
ONTO THE "PINK" GRAPH WITH
EQUATION $y = -[f(x)-10]$
OR $y = 10 - f(x)$



HENCE WE CAN OBTAIN THE EQUATION OF $g(x)$

$$\begin{aligned}\Rightarrow g(x) &= 10 - f(x) \\ \Rightarrow g(x) &= 10 - (x+1)(5-x) \\ \Rightarrow g(x) &= 10 + (x+1)(x-5) \\ \Rightarrow g(x) &= 10 + x^2 - 4x - 5 \\ \Rightarrow g(x) &= x^2 - 4x + 5\end{aligned}$$

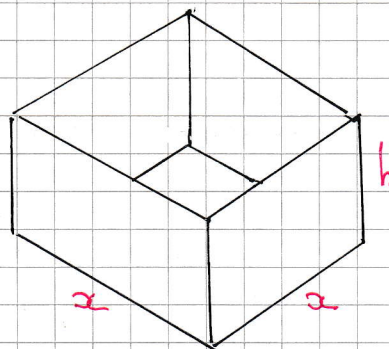
- 1 -

1YGB - MPI PAPER § - QUESTION 10

THE BOX HAS TO HAVE A FIXED VOLUME

$$x^2 h = \text{constant volume}$$

$$x^2 h = V$$



THE SURFACE AREA OF THE BOX IS GIVEN BY

$$A = x^2 + 4xh$$

$$A = x^2 + \frac{4x^2 h}{x}$$

$$A = x^2 + \frac{4V}{x}$$

$$A = x^2 + 4Vx^{-1}$$

DIFFERENTIATING & SETTING TO ZERO

$$\frac{dA}{dx} = 2x - 4Vx^{-2}$$

$$0 = 2x - \frac{4V}{x^2}$$

$$\frac{4V}{x^2} = 2x$$

$$2x^3 = 4V$$

$$x^3 = 2V$$

$$x = \sqrt[3]{2V}$$

CHECK WHETHER THIS VALUE OF x PRODUCES A MINIMUM OR MAXIMUM

$$\frac{d^2A}{dx^2} = 2 + 8Vx^{-3} = 2 + \frac{8V}{x^3}$$

$$\left. \frac{d^2A}{dx^2} \right|_{x=\sqrt[3]{2V}} = 2 + \frac{8V}{2V} = 6 > 0$$

INDEED THIS VALUE OF x MINIMIZES

YGB - MPI PAPER 2 - QUESTION 10

USING $x^2 h = V$

$$\Rightarrow h = \frac{V}{x^2}$$

$$\Rightarrow h = \frac{V}{(\sqrt[3]{2V})^2} = \frac{V}{[(2V)^{\frac{1}{3}}]^2} = \frac{V}{(2V)^{\frac{2}{3}}}$$

$$\Rightarrow h = \frac{V}{2^{\frac{2}{3}} V^{\frac{2}{3}}} = \frac{V^{\frac{1}{3}}}{2^{\frac{2}{3}}} = \frac{V^{\frac{1}{3}} \times 2^{\frac{1}{3}}}{2^{\frac{2}{3}} \times 2^{\frac{1}{3}}}$$

$$\Rightarrow h = \frac{2^{\frac{1}{3}} V^{\frac{1}{3}}}{2} = \frac{(2V)^{\frac{1}{3}}}{2}$$

hence $h = \frac{x}{2}$

$\therefore x = 2h$ WITH SURFACE IS MINIMUM

+ -

YGB - MPL PAPER 5 - QUESTION 11

ASSERTION: THE SQUARE OF AN ODD POSITIVE INTEGER IS ALWAYS OF THE FORM $8T+1$, WHERE " T " IS A TRIANGLE NUMBER

PROOF BY EXHAUSTION

● LET n BE ODD

$$\Rightarrow n = 2m+1$$

$$\Rightarrow 2n+1 = 2(2m+1)+1$$

$$\Rightarrow 2n+1 = 4m+3$$

e.g.

$$\begin{aligned} 7 &= (4 \times 1) + 3 \\ 35 &= (4 \times 8) + 3 \\ 47 &= (4 \times 11) + 3 \\ &\text{ETC} \end{aligned}$$

● LET n BE EVEN

$$\Rightarrow n = 2m$$

$$\Rightarrow 2n+1 = 2(2m)+1$$

$$\Rightarrow 2n+1 = 4m+1$$

e.g.

$$\begin{aligned} 5 &= (4 \times 1) + 1 \\ 21 &= (4 \times 5) + 1 \\ 33 &= (4 \times 8) + 1 \\ &\text{ETC} \end{aligned}$$

● SQUARING THE ODD NUMBER IN EACH CASE YIELDS

$$\begin{aligned} (2n+1)^2 &= (4m+3)^2 \\ &= 16m^2 + 24m + 9 \\ &= 8(2m^2 + 3m + 1) + 1 \\ &= 8(2m+1)(m+1) + 1 \end{aligned}$$

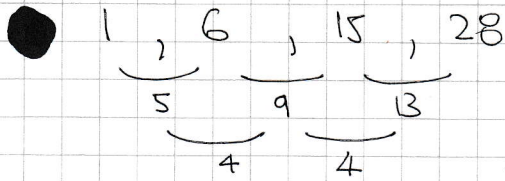
$$\begin{aligned} (2n+1)^2 &= (4m+1)^2 \\ &= 16m^2 + 8m + 1 \\ &= 8m(2m+1) + 1 \end{aligned}$$

(I.E. IN BOTH CASES THE OUTCOME IS OF THE FORM $8f(m)+1$)

IYGB - MPI PAPER 5 - QUESTION 11

NOW TO PROVE THAT $f(m)$ IS A TRIANGLE NUMBER

● TRIANGLE NUMBERS ARE 1, 3, 6, 10, 15, 21, 28, 36, ...



$u_n = 2n^2 + an + b$

$2n^2: 2, 8, 18, 32, \dots$

HERE: 1, 6, 15, 28

-1, -2, -3, -4

$\therefore u_n = 2n^2 - n$

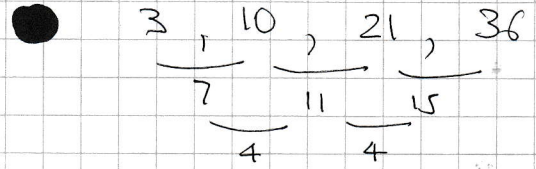
$\Rightarrow u_n = n(2n-1)$

$n \mapsto m+1$

$\Rightarrow u_m = (m+1)[2(m+1)-1]$

$\Rightarrow u_m = (m+1)(2m+1)$

WHICH WE OBTAINED



$u_n = 2n^2 + an + b$

$2n^2: 2, 8, 18, 28$

HERE: 3, 10, 21, 36

+1, +2, +3, +4

$\therefore u_n = 2n^2 + n$

$\Rightarrow u_n = n(2n+1)$

OR

$\Rightarrow u_m = m(2m+1)$

WHICH WE OBTAINED

EVERY SQUARE OF AN ODD NATURAL NUMBER GREATER THAN 3, IS OF THE FORM $8T+1$, WHERE T IS A TRIANGLE NUMBER

LYGB - MPI PAPER 5 - QUESTION 12

$$3e^{2(x+1)} - (2e)^x(e^4 + 9) + 3e^2 4^x = 0$$

● Process as follows

$$\Rightarrow 3e^{2x+2} - 2^x e^x (e^4 + 9) + 3e^2 4^x = 0$$

$$\Rightarrow 3e^{2x} e^2 - 2^x e^x (e^4 + 9) + 3e^2 (2^x)^2 = 0$$

● DIVIDE THE EQUATION THROUGH BY $3e^2 e^x (2^x) \neq 0$

$$\Rightarrow \frac{\cancel{3}e^{2x}e^2}{\cancel{3}\cancel{e^2}e^x(2^x)} - \frac{\cancel{2^x}e^x(e^4+9)}{3e^2\cancel{e^x}(2^x)} + \frac{\cancel{3}\cancel{e^2}(2^x)^2}{\cancel{3}\cancel{e^2}e^x(2^x)} = 0$$

$$\Rightarrow \frac{e^x}{2^x} - \frac{e^4+9}{3e^2} + \frac{2^x}{e^x} = 0$$

● LET $A = \frac{e^x}{2^x}$ TO TRANSFORM THE ABOVE EQUATION INTO

A QUADRATIC IN $\frac{e^x}{2^x}$

$$\Rightarrow A - \frac{e^4+9}{3e^2} + \frac{1}{A} = 0$$

$$\Rightarrow A^2 - A\left(\frac{e^4+9}{3e^2}\right) + 1 = 0$$

● COMPLETING THE SQUARE (OR ATTEMPT TO FACTORIZE)

$$\Rightarrow \left[A - \frac{e^4+9}{6e^2}\right]^2 - \frac{(e^4+9)^2}{36e^4} + 1 = 0$$

$$\Rightarrow \left[A - \frac{e^4+9}{6e^2}\right]^2 = \frac{(e^4+9)^2}{36e^4} - 1$$

1YGB - MPI PAPER 2 - QUESTION 12

TIDY THE R.H.S FIRST

$$\begin{aligned} \frac{(e^4+9)^2}{36e^4} - 1 &= \frac{e^8 + 18e^4 + 81}{36e^4} - \frac{36e^4}{36e^4} = \frac{e^8 - 18e^4 + 81}{36e^4} \\ &= \frac{(e^4-9)^2}{36e^4} = \left(\frac{e^4-9}{6e^2}\right)^2 \end{aligned}$$

THUS WE HAVE

$$\Rightarrow \left[A - \frac{e^4+9}{6e^2} \right]^2 = \left(\frac{e^4-9}{6e^2} \right)^2$$

$$\Rightarrow A - \frac{e^4+9}{6e^2} = \begin{cases} \frac{e^4-9}{6e^2} \\ \frac{9-e^4}{6e^2} \end{cases}$$

$$\Rightarrow A = \begin{cases} \frac{2e^4}{6e^2} \\ \frac{18}{6e^2} \end{cases}$$

$$\Rightarrow A = \begin{cases} \frac{1}{3}e^2 \\ 3e^{-2} \end{cases}$$

SOLVING EACH CASE SEPARATELY

$$\Rightarrow \frac{e^x}{2^x} = \frac{1}{3}e^2$$

$$\Rightarrow \left(\frac{1}{2}e\right)^x = \frac{1}{3}e^2$$

$$\Rightarrow \ln\left(\frac{1}{2}e\right)^x = \ln\left(\frac{1}{3}e^2\right)$$

$$\Rightarrow \frac{e^x}{2^x} = \frac{3}{e^2}$$

$$\Rightarrow \left(\frac{e}{2}\right)^x = \frac{3}{e^2}$$

$$\Rightarrow \ln\left(\frac{e}{2}\right)^x = \ln\left(\frac{3}{e^2}\right)$$

1YGB - MPI PAGE 5 - QUESTION 12

$$\Rightarrow x \ln\left(\frac{1}{2}e\right) = \ln\frac{3}{e^2}$$

$$\Rightarrow x \left[\ln\frac{1}{2} + \ln e \right] = \ln\frac{3}{e^2}$$

$$\Rightarrow x \left[-\ln 2 + 1 \right] = -\ln 3 + 2$$

$$\Rightarrow x = \frac{2 - \ln 3}{1 - \ln 2}$$

$$\Rightarrow x \ln\left(\frac{1}{2}e\right) = \ln\left(\frac{3}{e^2}\right)$$

$$\Rightarrow x \left[\ln\frac{1}{2} + \ln e \right] = \ln 3 - \ln e^2$$

$$\Rightarrow x \left[-\ln 2 + 1 \right] = \ln 3 - 2$$

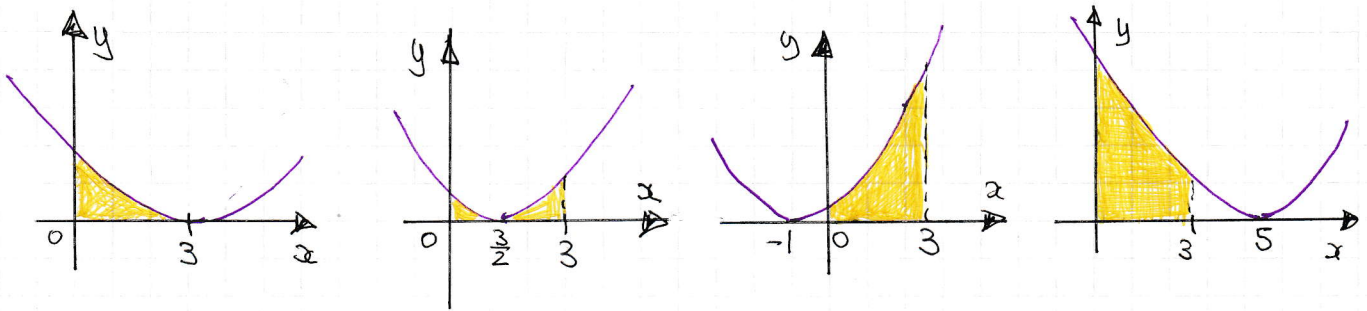
$$\Rightarrow x = \frac{\ln 3 - 2}{1 - \ln 2}$$

$$\Rightarrow x = -\frac{2 - \ln 3}{1 - \ln 2}$$

-|-

1YGB - MPI PAPER 5 - QUESTION 13

- START WITH SOME DIAGRAMS SHOWING SOME POSSIBLE CONFIGURATIONS



- GET AN EXPRESSION FOR THE AREA IN TERMS OF t , FOR $y = (x-t)^2$

$$\begin{aligned} \text{AREA} &= \int_0^3 (x-t)^2 dx = \int_0^3 x^2 - 2tx + t^2 dx \\ &= \left[\frac{1}{3}x^3 - tx^2 + t^2x \right]_0^3 = (9 - 9t + 3t^2) - (0) \end{aligned}$$

- LET $f(t) = 3t^2 - 9t + 9$

- BY COMPLETING THE SQUARE (OR CALCULUS)

$$\begin{aligned} \text{AREA} = f(t) &= 3 \left[t^2 - 3t + 3 \right] \\ &= 3 \left[\left(t - \frac{3}{2} \right)^2 - \frac{9}{4} + 3 \right] \\ &= 3 \left[\left(t - \frac{3}{2} \right)^2 + \frac{3}{4} \right] \\ &= 3 \left(t - \frac{3}{2} \right)^2 + \frac{9}{4} \end{aligned}$$

∴ MINIMUM AREA IS $\frac{9}{4}$

(IT OCCURS WHEN $t = \frac{3}{2}$) (DIAGRAM 2)