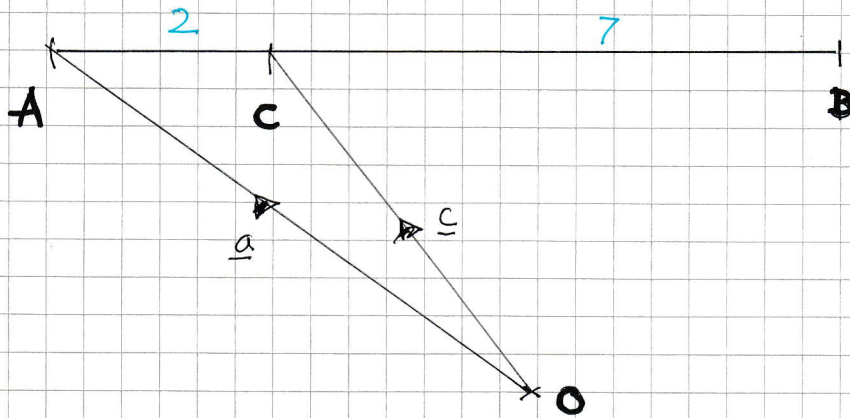


— 1 —

# IYGB - MP2 PART 1 - QUESTION 1

$$A(-2, -10, -17) \quad B(25, -1, 19) \quad |\vec{AC}| : |\vec{CB}| : \\ 2 : 7$$



LOOKING AT THE DIAGRAM

$$\Rightarrow \vec{OC} = \vec{OA} + \vec{AC}$$

$$\Rightarrow \vec{OC} = \vec{OA} + \frac{2}{9} \vec{AB}$$

$$\Rightarrow \underline{c} = \underline{a} + \frac{2}{9} (\underline{b} - \underline{a})$$

$$\Rightarrow \underline{c} = \underline{a} + \frac{2}{9} \underline{b} - \frac{2}{9} \underline{a}$$

$$\Rightarrow \underline{c} = \frac{7}{9} \underline{a} + \frac{2}{9} \underline{b}$$

$$\Rightarrow \underline{c} = \frac{1}{9} [7\underline{a} + 2\underline{b}]$$

$$\Rightarrow \underline{c} = \frac{1}{9} [7(-2, -10, -17) + 2(25, -1, 19)]$$

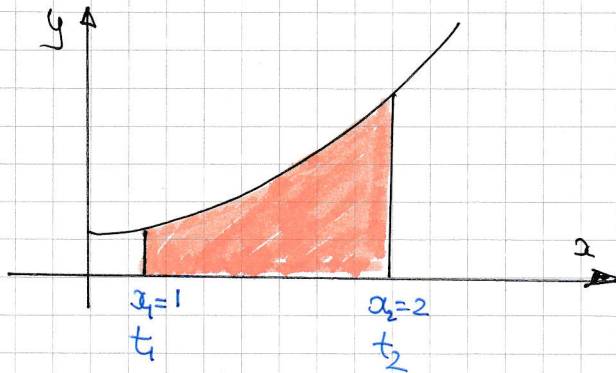
$$\Rightarrow \underline{c} = \frac{1}{9} (36, -72, -81)$$

$$\Rightarrow \underline{c} = (4, -8, -9)$$

$$\therefore \underline{C(4, -8, -9)}$$

# 1YGB - MP2 PAPER 1 - QUESTION 2

a) LOOKING AT THE DIAGRAM TO CONVERT UNITS



•  $x=1$   
 $\ln t=1$   
 $t=e$   
 $\uparrow$   
 $t_1$

•  $x=2$   
 $\ln t=2$   
 $t=e^2$   
 $\uparrow$   
 $t_2$

$$\begin{aligned} \text{AREA} &= \int_{x_1}^{x_2} y(x) dx = \int_{t_1}^{t_2} y(t) \frac{dx}{dt} dt = \int_e^{e^2} (t + t^{\frac{1}{2}}) \left(\frac{1}{t}\right) dt \\ &= \int_e^{e^2} t \times \frac{1}{t} + t^{\frac{1}{2}} \times \frac{1}{t} dt = \int_e^{e^2} 1 + t^{-\frac{1}{2}} dt \end{aligned}$$

~~to review~~

b) INTEGRATING PART (a)

$$\begin{aligned} \dots &= \left[ t + 2t^{\frac{1}{2}} \right]_e^{e^2} = \left[ e^2 + 2(e^2)^{\frac{1}{2}} \right] - \left[ e + 2e^{\frac{1}{2}} \right] \\ &= e^2 + 2e - e - 2e^{\frac{1}{2}} \\ &= e^2 + e - 2\sqrt{e} \end{aligned}$$

~~to review~~



- 1 -

## LYGB - MP2 PAPER 11 - QUESTION 3

a) WORKING AS FOLLOWS

$$\Rightarrow \frac{1}{\cos^2\theta} - \frac{1}{\cos^2\phi} = 3$$

$$\Rightarrow \sec^2\theta - \sec^2\phi = 3$$

$$\Rightarrow (1 + \tan^2\theta) - (1 + \tan^2\phi) = 3$$

$$1 + \tan^2 A \equiv \sec^2 A$$

$$\Rightarrow \tan^2\theta - \tan^2\phi = 3$$

$$\Rightarrow t^2 - (t-1)^2 = 3$$

$$\Rightarrow t^2 - (t^2 - 2t + 1) = 3$$

$$\Rightarrow \cancel{t^2} - \cancel{t^2} + 2t - 1 = 3$$

$$\Rightarrow 2t = 4$$

$$\Rightarrow t = 2$$

b) USING THE TANGENT COMPOUND IDENTITY

$$\Rightarrow \tan(\theta + \phi) = \frac{\tan\theta + \tan\phi}{1 - \tan\theta\tan\phi} = \frac{t + (t-1)}{1 - t(t-1)}$$

$$= \frac{2t-1}{1-t^2+t} = \frac{2t-1}{1-2^2+2} = \frac{2 \times 2 - 1}{3 - 2^2}$$

$$= \frac{3}{-1} = -3$$

# 1YGB - MP2 PAPER 1 - QUESTION 4

a) USING THE FORMULA  $u_n = ar^{n-1}$

$$u_4 = 6$$

$$ar^3 = 6$$

$$u_3 + u_5 = 20$$

$$ar^2 + ar^4 = 20$$

$$ar^2(1+r^2) = 20$$

DIVIDING THE EQUATIONS

$$\frac{\cancel{ar^2}(1+r^2)}{\cancel{ar^2}} = \frac{20}{6} \Rightarrow$$

$$\frac{1+r^2}{r} = \frac{10}{3}$$

$$\Rightarrow 3(1+r^2) = 10r$$

$$\Rightarrow 3r^2 + 3 = 10r$$

$$\Rightarrow \underline{3r^2 - 10r + 3 = 0}$$

~~AS REQUIRED~~

b) SOLVING THE QUADRATIC

$$\Rightarrow (3r - 1)(r - 3) = 0$$

$$\Rightarrow r = \begin{cases} \frac{1}{3} \\ 3 \end{cases}$$

~~3~~ NO SUM TO INFINITY FOR THIS VALUE

USING  $ar^3 = 6$

$$\Rightarrow a \times \left(\frac{1}{3}\right)^3 = 6$$

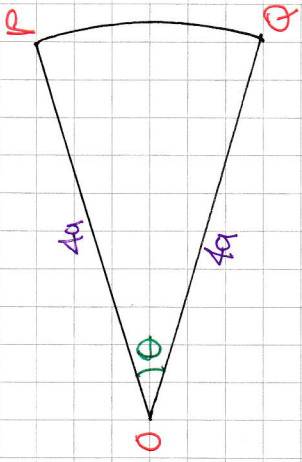
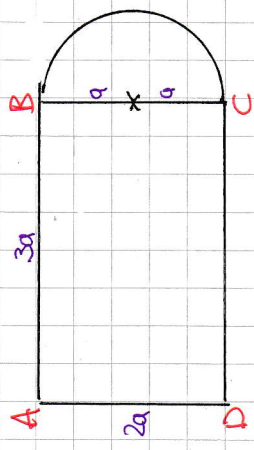
$$\Rightarrow a = 162$$

FINALLY 
$$S_{\infty} = \frac{a}{1-r} = \frac{162}{1-\frac{1}{3}} = \frac{162}{\frac{2}{3}} = \underline{243}$$



IYGB - MP2 PAPER 1 - QUESTION 5

a) LOOKING AT THE DIAGRAMS



"AREA OF X" = "AREA OF Y"

$$(2a)(3a) + \frac{1}{2}\pi a^2 = \frac{1}{2}(4a)^2 \theta$$

"  $\frac{1}{2}\pi a^2$  "

$$\Rightarrow 6a^2 + \frac{1}{2}\pi a^2 = 8a^2 \theta$$

$$\Rightarrow 6 + \frac{1}{2}\pi = 8\theta$$

$$\Rightarrow 12 + \pi = 16\theta$$

$$\Rightarrow \theta = \frac{1}{16}(\pi + 12)$$

b) PERIMETER OF X - PERIMETER X

$$= [4a + 4a + (4a)\theta] - [2a + 3a + 3a + \frac{1}{2}(2\pi a)]$$

"L = rθ"      "HALF CIRCUMFERENCE"

$$= 8a + 4a\theta - [8a + \pi a]$$

$$= \cancel{8a} + 4a\theta - \cancel{8a} - \pi a$$

$$= 4a\theta - \pi a$$

$$= 4a \times \frac{1}{16}(\pi + 12) - \pi a$$

$$= \frac{1}{4}a(\pi + 12) - \pi a$$

$$= \frac{1}{4}\pi a + 3a - \pi a$$

$$= 3a - \frac{3}{4}\pi a$$

$$= \frac{3}{4}a(4 - \pi)$$

~~AS REQUIRED~~

# YGB - MP2 PAPER 1 - QUESTION 6

USING THE SUBSTITUTION  $u = \sqrt[3]{x}$

$$\begin{aligned} \int_0^{\sqrt{27}} \frac{2}{\sqrt[3]{x^2} + x} dx &= \int_0^{\sqrt{3}} \frac{2}{u + u^3} (3u^2 du) \\ &= \int_0^{\sqrt{3}} \frac{6u^2}{u(1+u^2)} du = \int_0^{\sqrt{3}} \frac{6u}{u^2+1} du \\ &= 3 \int_0^{\sqrt{3}} \frac{2u}{u^2+1} du \end{aligned}$$

↑

$$\int \frac{f'(x)}{f(x)} dx = \ln|f(x)| + C$$

- $u = \sqrt[3]{x}$   
 $u^3 = x$   
 $x = u^3$   
 $\frac{dx}{du} = 3u^2$   
 $dx = 3u^2 du$
- $x = \sqrt{27}$   
 $27^{\frac{1}{2}} = u^3$   
 $3^{\frac{3}{2}} = u^3$   
 $3^{\frac{1}{2}} = u$
- $x = 0, u = 0$

USING THE ABOVE RESULT (OR ANOTHER SUBSTITUTION)

$$\begin{aligned} &= 3 \left[ \ln|u^2+1| \right]_0^{\sqrt{3}} = 3 \left[ \ln 4 - \cancel{\ln 1} \right] \\ &= 3 \times 2 \ln 2 \\ &= \underline{6 \ln 2} \end{aligned}$$

/ /  
AS REQUIRED



1YGB - MP2 PAPER 1) - QUESTION 7

a) DIFFERENTIATE W.R.T x

$$\Rightarrow \frac{d}{dx}(2xy) = \frac{d}{dx}(2^x + y^2)$$

$$\Rightarrow 2y + 2x \frac{dy}{dx} = 2^x \ln 2 + 2y \frac{dy}{dx}$$

$$\frac{d}{dx}(a^x) = a^x \ln a$$

$$\Rightarrow 2x \frac{dy}{dx} - 2y \frac{dy}{dx} = 2^x \ln 2 - 2y$$

$$\Rightarrow (2x - 2y) \frac{dy}{dx} = -2y + 2^x \ln 2$$

$$\Rightarrow \frac{dy}{dx} = \frac{-2y + 2^x \ln 2}{2x - 2y}$$

$$\Rightarrow \frac{dy}{dx} = \frac{-2(y - 2^{x-1} \ln 2)}{-2(y - x)}$$

$$\Rightarrow \frac{dy}{dx} = \frac{y - 2^{x-1} \ln 2}{y - x}$$

AS REQUIRED

b) FIRST FIND THE FULL COORDINATES OF P

$$\text{with } x=2 \Rightarrow 2xy = 2^x + y^2$$

$$\Rightarrow 4y = 4 + y^2$$

$$\Rightarrow 0 = y^2 - 4y + 4$$

$$\Rightarrow 0 = (y-2)^2$$

$$\Rightarrow y = 2$$

∴ P(2,2)

NEXT FIND THE GRADIENT AT P

$$\left. \frac{dy}{dx} \right|_{(2,2)} = \frac{2 - 2 \ln 2}{2 - 2} = \frac{2 - 2 \ln 2}{0} = \infty \quad \leftarrow \text{INFINITE GRADIENT}$$



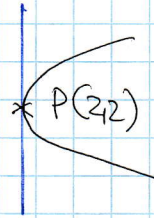

1YGB - MP2 PAPER II - QUESTION 7

HENCE THE TANGENT AT  $P(2,2)$  IS "VERTICAL"

i.e

EITHER

OR



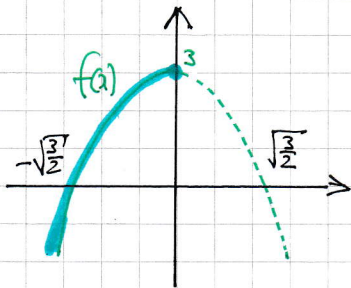
∴ EQUATION OF TANGENT IS  $x=2$



+ -

## LYGB - MP2 PAPER 11 - QUESTION 8

a) SKETCHING THE FUNCTION



RANGE

$$f(x) \leq 3$$

b) FINDING THE COMPOSITION  $f(f(x))$

$$\begin{aligned} f(f(x)) &= f(3-2x^2) = 3-2(3-2x^2)^2 = 3-2(9-12x^2+4x^4) \\ &= 3-18+24x^2-8x^4 = -8x^4+24x^2-15 \end{aligned}$$

AS REQUIRED

SOLVING THE REQUIRED EQUATION

$$\Rightarrow -8x^4 + 24x^2 - 15 = -47$$

$$\Rightarrow -8x^4 + 24x^2 + 32 = 0$$

$$\Rightarrow x^4 - 3x^2 - 4 = 0$$

$$\Rightarrow (x^2 + 1)(x^2 - 4) = 0$$

$$\Rightarrow (x^2 + 1)(x - 2)(x + 2) = 0$$

↑  
IRREDUCIBLE AS  $x^2 + 1 \neq 0$

$$\Rightarrow x = \begin{cases} \text{NOT IN THE DOMAIN} \\ -2 \end{cases}$$

$$\Rightarrow x = -2$$

YGB - MP2 PAPER 1 - QUESTION 8

c) USING STANDARD METHODOLOGY

$$\Rightarrow y = 3 - 2x^2$$

$$\Rightarrow 2x^2 = 3 - y$$

$$\Rightarrow x^2 = \frac{3 - y}{2}$$

$$\Rightarrow x = \pm \sqrt{\frac{3 - y}{2}}$$

↓ BUT  $x \leq 0$

$$\Rightarrow x = -\sqrt{\frac{3 - y}{2}}$$

$$\therefore f^{-1}(x) = -\sqrt{\frac{3 - x}{2}}$$

d) SOLVING  $f = f^{-1}$  I.E.  $3 - 2x^2 = -\sqrt{\frac{3 - x}{2}}$  IS UNPLEASANT

WE SOLVE INSTEAD EITHER  $f(x) = x$

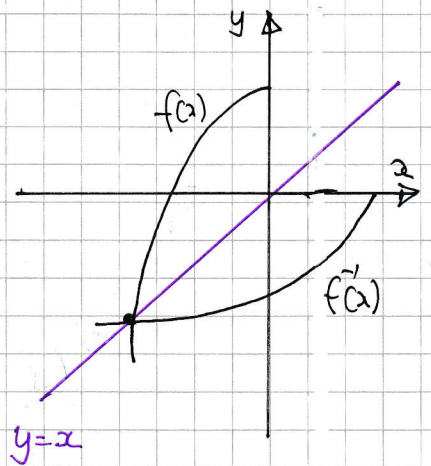
OR  $f^{-1}(x) = x$  (DIAGRAM)

$$\Rightarrow 3 - 2x^2 = x$$

$$\Rightarrow 0 = 2x^2 + x - 3$$

$$\Rightarrow 0 = (2x + 3)(x - 1)$$

$$\Rightarrow x = \begin{cases} 1 \\ -\frac{3}{2} \end{cases} \quad \text{NOT IN THE DOMAIN}$$





TYGB - MP2 PAPER 4 - QUESTION 9

a) MANIPULATE BEFORE DIFFERENTIATING!!

$$\begin{aligned} \frac{d}{dx} [\cos 2x \tan 2x] &= \frac{d}{dx} \left[ \cos 2x \times \frac{\sin 2x}{\cos 2x} \right] = \frac{d}{dx} [\sin 2x] \\ &= 2 \times \cos 2x = \underline{2 \cos 2x} \quad \text{As required} \end{aligned}$$

OR BY THE PRODUCT RULE

$$\begin{aligned} \frac{d}{dx} [\cos 2x \tan 2x] &= -2 \sin 2x \tan 2x + \cos 2x \sec^2 2x \times 2 \\ &= 2 \cos 2x \sec^2 2x - 2 \sin 2x \tan 2x \\ &= 2 \left[ \cos 2x \times \frac{1}{\cos^2 2x} - \sin 2x \times \frac{\sin 2x}{\cos 2x} \right] \\ &= 2 \left[ \frac{1}{\cos 2x} - \frac{\sin^2 2x}{\cos 2x} \right] \\ &= 2 \left[ \frac{1 - \sin^2 2x}{\cos 2x} \right] = 2 \times \frac{\cos^2 2x}{\cos 2x} \\ &= \underline{2 \cos 2x} \quad \text{As required} \end{aligned}$$

$\cos^2 2x + \sin^2 2x = 1$

b) BY THE QUOTIENT RULE

$$\begin{aligned} \frac{d}{dx} \left[ \frac{x^2}{(3x-1)^2} \right] &= \frac{(3x-1) \times 2x - x^2 \times 2(3x-1) \times 3}{[(3x-1)^2]^2} \\ &= \frac{2x(3x-1)^2 - 6x^2(3x-1)}{(3x-1)^4} = \frac{(3x-1)[2x(3x-1) - 6x^2]}{(3x-1)^4} \\ &= \frac{6x^2 - 2x - 6x^2}{(3x-1)^3} = \frac{-2x}{(3x-1)^3} \\ &= \underline{-\frac{2x}{(3x-1)^3}} \quad \text{As required} \end{aligned}$$

- 1 -

## IVGB - MP2 PAPER H - QUESTION 10

a) START BY DIFFERENTIATION

$$\Rightarrow x = \ln(y^3 - y)$$

$$\Rightarrow \frac{dx}{dy} = \frac{3y^2 - 1}{y^3 - y}$$

$$\Rightarrow \frac{dy}{dx} = \frac{y^3 - y}{3y^2 - 1}$$

SETTING  $\frac{dy}{dx} = 4$

$$\Rightarrow \frac{y^3 - y}{3y^2 - 1} = 4$$

$$\Rightarrow y^3 - y = 12y^2 - 4$$

$$\Rightarrow y^3 - 12y^2 - y + 4 = 0$$

AS REQUIRED

b) LET  $f(y) = y^3 - 12y^2 - y + 4$

$$\bullet \underline{f'(y) = 3y^2 - 24y - 1}$$

$$\bullet f(12) = -8$$

$$\bullet \underline{f'(12) = 143}$$

BY THE NEWTON RAPHSON METHOD

$$\Rightarrow y_{n+1} = y_n - \frac{f(y_n)}{f'(y_n)}$$



1YGB - MP2 PAPER 1 - QUESTION 10

$$\Rightarrow y = 12 - \frac{f(12)}{f'(12)}$$

$$\Rightarrow y = 12 - \frac{-8}{143}$$

$$\Rightarrow y = \frac{1724}{143}$$

$$\Rightarrow y \approx 12.05594\dots$$

q Hence  $x = 7.46176\dots$

$\therefore P(7.46, 12.06)$  ~~AS REQUIRED~~

- 1 -

# IYGB - MP2 PAPER II - QUESTION 11

a) USING THE O.D.E GIVEN

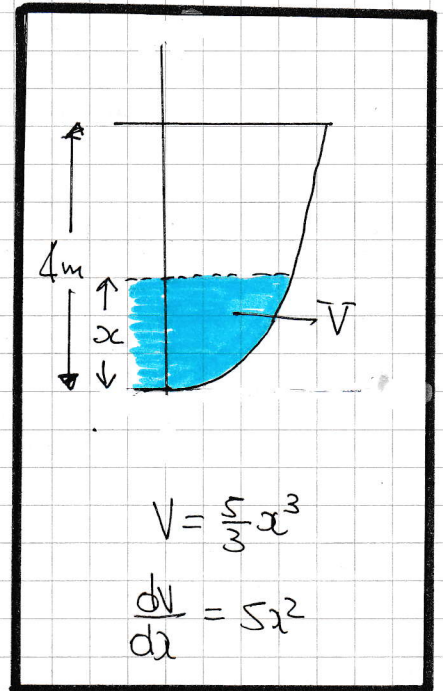
$$(I) \quad \frac{dV}{dt} = -kx^{\frac{1}{2}}$$

$$\frac{dV}{dx} \times \frac{dx}{dt} = -kx^{\frac{1}{2}}$$

$$5x^2 \frac{dx}{dt} = -kx^{\frac{1}{2}}$$

$$\underline{5x^{\frac{3}{2}} \frac{dx}{dt} = -k}$$

★ REQUIRAD



(II) SOLVING BY SEPARATION OF VARIABLES

$$\Rightarrow 5x^{\frac{3}{2}} dx = -k dt$$

$$\Rightarrow \int 5x^{\frac{3}{2}} dx = \int -k dt$$

$$\Rightarrow \boxed{2x^{\frac{5}{2}} = -kt + C}$$

with  $t=0$ ,  $x=4$  (given)

$$\Rightarrow 2 \times 4^{\frac{5}{2}} = -k \times 0 + C$$

$$\Rightarrow C = 64$$

$$\Rightarrow \boxed{2x^{\frac{5}{2}} = 64 - kt}$$

with  $t=32$ ,  $x=0$  (TANK IS EMPTY IN 32 MINUTES)

$$\Rightarrow 2 \times 0^{\frac{5}{2}} = 64 - k \times 32$$

$$\Rightarrow 0 = 64 - 32k$$

$$\Rightarrow k = 2$$

$$\Rightarrow 2x^{\frac{5}{2}} = 64 - 2t$$



1YGB - MP2 PAPER II - QUESTION 11

$$\Rightarrow 2t = 64 - 2x^{\frac{5}{2}}$$

$$\Rightarrow t = 32 - x^{\frac{5}{2}} \quad \text{As required}$$

b) REMODELLING THE O.D.F BY LOOKING AT THE ORIGINAL O.D.E

$$\frac{dv}{dt} = -kx^{\frac{1}{2}} \quad \text{LEAKAGE ONLY}$$

Now

$$\frac{dv}{dt} = -kx^{\frac{1}{2}} + \frac{1}{2} \quad \begin{matrix} \uparrow & \uparrow \\ \text{LEAKAGE AS BEFORE} & \text{WATER IN AT CONSTANT RATE} \end{matrix}$$

(I) RECREATING THE RATES AS BEFORE

$$\Rightarrow \frac{dv}{dt} = \frac{1}{2} - kx^{\frac{1}{2}}$$

$$\Rightarrow \frac{dv}{dx} \times \frac{dx}{dt} = \frac{1}{2} - 2x^{\frac{1}{2}}$$

$$\Rightarrow 5x^2 \frac{dx}{dt} = \frac{1}{2} - 2x^{\frac{1}{2}}$$

$$\Rightarrow 10x^2 \frac{dx}{dt} = 1 - 4x^{\frac{1}{2}}$$

$$\Rightarrow \frac{dx}{dt} = \frac{1 - 4x^{\frac{1}{2}}}{10x^2} \quad \text{As required}$$

(II) FINALLY THE HEIGHT WILL NO LONGER CHANGE WHEN  $\frac{dx}{dt} = 0$

$$\frac{1 - 4x^{\frac{1}{2}}}{10x^2} = 0$$

$$\Rightarrow 1 - 4x^{\frac{1}{2}} = 0$$

$$\Rightarrow 4x^{\frac{1}{2}} = 1$$

$$\Rightarrow x^{\frac{1}{2}} = \frac{1}{4}$$

$$\Rightarrow x = \frac{1}{16} \quad \leftarrow \text{LIMITING VALUE FOR } x$$

AS THE HEIGHT STARTS FROM  $x=0$  & ITS LIMITING VALUE IS  $\frac{1}{16}$ , IT CANNOT EXCEED  $\frac{1}{16}$