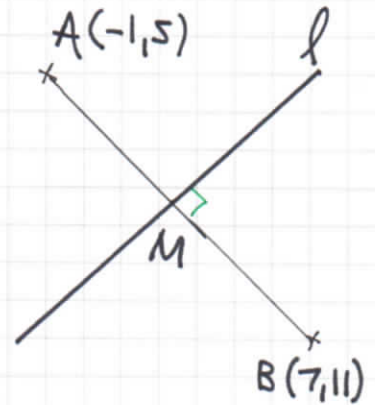


1YGB - SYNOPTIC PAPER A - QUESTION 1

a) MIDPOINT OF AB

$$M\left(\frac{x_1+x_2}{2}, \frac{y_1+y_2}{2}\right) = M\left(\frac{-1+7}{2}, \frac{5+11}{2}\right)$$

$$M(3, 8)$$



GRADIENT OF AB

$$\frac{y_2 - y_1}{x_2 - x_1} = \frac{11 - 5}{7 - (-1)} = \frac{6}{8} = \frac{3}{4}$$

GRADIENT OF l WILL BE $-\frac{4}{3}$

EQUATION OF THE PERPENDICULAR BISECTOR OF AB

$$\Rightarrow y - y_0 = m(x - x_0)$$

$$\Rightarrow y - 8 = -\frac{4}{3}(x - 3)$$

$$\Rightarrow 3y - 24 = -4x + 12$$

$$\Rightarrow 3y + 4x = 36$$

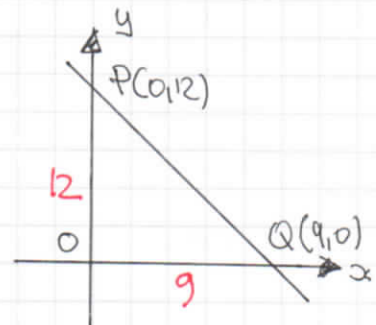
AS REQUIRED

b) DRAWING A "RELATIVE SCALE" DIAGRAM

$$4x + 3y = 36$$

$$\text{when } x=0 \Rightarrow y=12$$

$$\text{when } y=0 \Rightarrow x=9$$



$$\text{REQUIRED AREA} = \frac{1}{2}|OP| |OQ|$$

$$= \frac{1}{2} \times 12 \times 9$$

$$= 54$$

IYGB - SYNOPTIC PAPER A - QUESTION 2

$$f(x) = x^3 + x^2 - x + k, x \in \mathbb{R}$$

$(x-k)$ is a factor of $f(x)$

$$f(k) = 0 \Rightarrow k^3 + k^2 - k + k = 0$$

$$\Rightarrow k^3 + k^2 = 0$$

$$\Rightarrow k^2(k+1) = 0$$

$$\Rightarrow k = \begin{cases} 0 \\ -1 \end{cases}$$

- 1 -

1YGB - SYNOPTIC PAPER A - QUESTION 3

$$\begin{aligned} \text{a) I)} \quad \sqrt{98} + \sqrt{2} &= \sqrt{49} \sqrt{2} + \sqrt{2} \\ &= 7\sqrt{2} + \sqrt{2} \\ &= \underline{8\sqrt{2}} \end{aligned}$$

$$\begin{aligned} \text{II)} \quad (\sqrt{2} + 3)(2 - 3\sqrt{2}) &= 2\sqrt{2} - 3\sqrt{2}\sqrt{2} + 3 \times 2 - 9\sqrt{2} \\ &= 2\sqrt{2} - 6 + 6 - 9\sqrt{2} \\ &= \underline{-7\sqrt{2}} \end{aligned}$$

$$\text{b)} \quad \frac{27^t}{3^{t-1}} = 3\sqrt{3}$$

$$\Rightarrow \frac{(3^3)^t}{3^{t-1}} = 3^1 \times 3^{\frac{1}{2}}$$

$$\Rightarrow \frac{3^{3t}}{3^{t-1}} = 3^{\frac{3}{2}}$$

$$\Rightarrow 3^{3t-(t-1)} = 3^{\frac{3}{2}}$$

$$\Rightarrow 3^{2t+1} = 3^{\frac{3}{2}}$$

$$\Rightarrow 2t+1 = \frac{3}{2}$$

$$\Rightarrow 2t = \frac{1}{2}$$

$$\Rightarrow \underline{t = \frac{1}{4}}$$

VARIATION

$$\Rightarrow 3^{3t} = 3^{t-1} \times 3^{\frac{3}{2}}$$

$$\Rightarrow 3^{3t} = 3^{t+\frac{1}{2}}$$

$$\Rightarrow 3t = t + \frac{1}{2}$$

$$\Rightarrow 2t = \frac{1}{4}$$

$$\Rightarrow \underline{t = \frac{1}{4}}$$

YG-B - SYNOPTIC PAPER A - QUESTION 4

$$|2 - 2|2x - 3| \geq 7$$

$$\Rightarrow -2|2x - 3| \geq -5$$

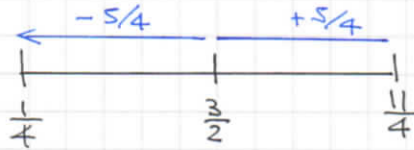
$$\Rightarrow |2x - 3| \leq \frac{5}{2}$$

$$\Rightarrow 2|x - \frac{3}{2}| \leq \frac{5}{2}$$

$$\Rightarrow |x - \frac{3}{2}| \leq \frac{5}{4}$$

THE STATEMENT ABOVE READS

"THE DIFFERENCE OF x FROM $\frac{3}{2}$ IS LESS THAN $\frac{5}{4}$ "



$$\therefore \underline{\underline{\frac{1}{4} \leq x \leq \frac{11}{4}}}}$$

ALTERNATIVE - SOLVE AN EQUATION INSTEAD

$$\Rightarrow 12 - 2|2x - 3| = 7$$

$$\Rightarrow 5 = 2|2x - 3|$$

$$\Rightarrow \frac{5}{2} = |2x - 3|$$

$$\Rightarrow \begin{cases} 2x - 3 = \frac{5}{2} \\ 2x - 3 = -\frac{5}{2} \end{cases}$$

$$\Rightarrow \begin{cases} 2x = \frac{11}{2} \\ 2x = \frac{1}{2} \end{cases}$$

$$\Rightarrow x = \begin{cases} \frac{11}{4} \\ \frac{1}{4} \end{cases}$$

THE SOLUTION INTERVAL IS EITHER BETWEEN $\frac{1}{4}$ & $\frac{11}{4}$ OR OUTSIDE


TRY A NUMBER, SAY $x=1$, IN THE INITIAL INEQUALITY

$$12 - 2|2 \times 1 - 3| \geq 7$$

$$12 - 2 \times 1 \geq 7$$

$$10 \geq 7$$

IF $x=1$ WORKS



$$\therefore \underline{\underline{\frac{1}{4} \leq x \leq \frac{11}{4}}}}$$

- 1 -

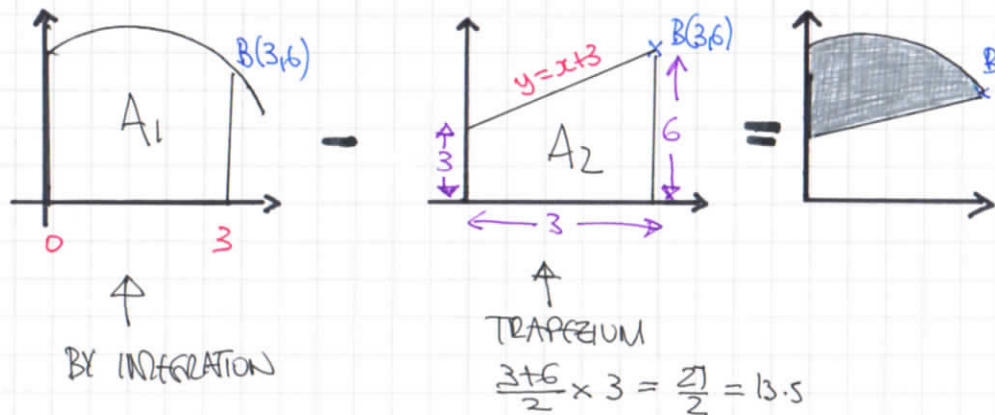
1YGB - SYNOPTIC PAPER A - QUESTION 5

- START BY FINDING THE CO-ORDINATES OF B

$$\left. \begin{array}{l} y = x+3 \\ y = 9+2x-x^2 \end{array} \right\} \Rightarrow x+3 = 9+2x-x^2$$
$$\Rightarrow x^2 - x - 6 = 0$$
$$\Rightarrow (x-3)(x+2) = 0$$
$$\Rightarrow x = \begin{array}{l} \cancel{-2} \\ 3 \end{array} \leftarrow A$$
$$\Rightarrow y = 3+3 = 6$$

$\therefore B(3,6)$

- THE REQUIRED AREA CAN BE FOUND AS FOLLOWS



- $A_1 = \int_0^3 9+2x-x^2 dx$

$$A_1 = \left[9x + x^2 - \frac{1}{3}x^3 \right]_0^3$$

$$A_1 = (27+9-9) - (0)$$

$$A_1 = 27$$

- HENCE THE REQUIRED AREA IS

$$27 - \frac{27}{2} = 27 - 13.5$$

$$= 13.5$$

\swarrow
AREA REQUIRED

IYGB - SYNOPTIC PAPER A - QUESTION 6

FORM AN EQUATION BASED ON THE AREA OF A TRAPEZIUM

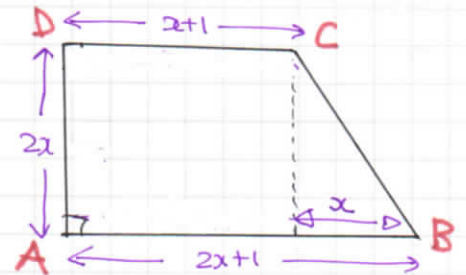
$$\Rightarrow \frac{(x+1) + (2x+1)}{2} \times 2x = 16$$

$$\Rightarrow (3x+2)x = 16$$

$$\Rightarrow 3x^2 + 2x - 16 = 0$$

$$\Rightarrow (3x+8)(x-2)$$

$$\Rightarrow x = \begin{cases} 2 \\ -\frac{8}{3} \end{cases} \quad x > 0$$



FINALLY BY PYTHAGORAS ON THE RIGHT ANGLED TRIANGLE

$$(2x)^2 + x^2 = |BC|^2$$

$$|BC|^2 = 5x^2$$

$$|BC| = +\sqrt{5}x$$

$$|BC| = \sqrt{5} \times 2$$

\therefore THE REQUIRED LENGTH IS

$$\sqrt{5} \times 2$$

-1-

IYGB - SYNOPTIC PAPER A - QUESTION 7

a) EXPAND USING THE STANDARD FORMULA

$$f(x) = \sqrt{1 + \frac{1}{8}x} = \left(1 + \frac{1}{8}x\right)^{\frac{1}{2}}$$

$$f(x) = 1 + \frac{\frac{1}{2}}{1} \left(\frac{1}{8}x\right) + \frac{\frac{1}{2}(-\frac{1}{2})}{1 \times 2} \left(\frac{1}{8}x\right)^2 + o(x^3)$$

$$f(x) = 1 + \frac{1}{16}x - \frac{1}{512}x^2 + o(x^3)$$

b) LET $x=1$ IN THE ABOVE EXPANSION

$$\sqrt{1 + \frac{1}{8} \times 1} \approx 1 + \frac{1}{16} \times 1 - \frac{1}{512} \times 1^2$$

$$\sqrt{\frac{9}{8}} \approx \frac{543}{512}$$

NOW WE HAVE TWO POSSIBLE APPROXIMATIONS

$$\frac{3}{2\sqrt{2}} \approx \frac{543}{512}$$

$\div 3$ \downarrow

$$\frac{1}{2\sqrt{2}} \approx \frac{181}{512}$$

$\times 2$ \downarrow

$$\frac{1}{\sqrt{2}} \approx \frac{181}{256}$$

$$\sqrt{2} \approx \frac{256}{181}$$

RATIONALISE LHS.

\downarrow

$$\frac{\sqrt{2}}{2} \approx \frac{181}{256}$$

$\times 2$ \downarrow

$$\sqrt{2} \approx \frac{181}{128}$$

1YGB - SYNOPTIC PAPER A - QUESTION 8

a) DRAWING A PARALLELOGRAM

A POSITION VECTOR APPROACH
IS AS FOLLOWS

$$\Rightarrow \vec{OD} = \vec{OA} + \vec{AD}$$

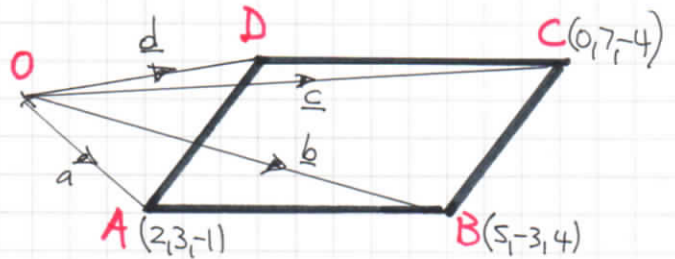
$$\Rightarrow \vec{OD} = \vec{OA} + \vec{BC} \text{ (PARALLELOGRAM)}$$

$$\Rightarrow \underline{d} = \underline{a} + (\underline{c} - \underline{b})$$

$$\Rightarrow \underline{d} = \underline{a} + \underline{c} - \underline{b}$$

$$\Rightarrow \underline{d} = \begin{pmatrix} 2 \\ 3 \\ -1 \end{pmatrix} + \begin{pmatrix} 0 \\ 7 \\ -4 \end{pmatrix} - \begin{pmatrix} 5 \\ -3 \\ 4 \end{pmatrix} = \begin{pmatrix} -3 \\ 13 \\ -9 \end{pmatrix}$$

$$\therefore \underline{d} = -3\underline{i} + 13\underline{j} - 9\underline{k}$$



THERE ARE SEVERAL OTHER APPROACHES (MOST ARE NO MORE THAN INSPECTION)

$$b) \bullet |\vec{AC}| = |\underline{c} - \underline{a}| = \left| \begin{pmatrix} 0 \\ 7 \\ -4 \end{pmatrix} - \begin{pmatrix} 2 \\ 3 \\ -1 \end{pmatrix} \right| = \begin{vmatrix} -2 \\ 4 \\ -3 \end{vmatrix} = \sqrt{4 + 16 + 9} = \sqrt{29}$$

$$\bullet |\vec{AB}| = |\underline{b} - \underline{a}| = \left| \begin{pmatrix} 5 \\ -3 \\ 4 \end{pmatrix} - \begin{pmatrix} 2 \\ 3 \\ -1 \end{pmatrix} \right| = \begin{vmatrix} 3 \\ -6 \\ 5 \end{vmatrix} = \sqrt{9 + 36 + 25} = \sqrt{70}$$

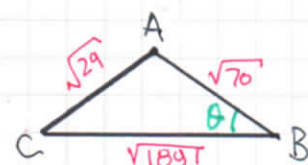
$$\bullet |\vec{BC}| = |\underline{c} - \underline{b}| = \left| \begin{pmatrix} 0 \\ 7 \\ -4 \end{pmatrix} - \begin{pmatrix} 5 \\ -3 \\ 4 \end{pmatrix} \right| = \begin{vmatrix} -5 \\ 10 \\ - \end{vmatrix} = \sqrt{25 + 100 + 64} = \sqrt{189}$$

BY THE COSINE RULE

$$(\sqrt{29})^2 = \sqrt{70}^2 + \sqrt{189}^2 - 2 \times \sqrt{70} \times \sqrt{189} \cos \theta$$

$$\cos \theta = \frac{70 + 189 - 29}{2 \sqrt{70} \sqrt{189}}$$

$$\theta \approx 0.999811 \dots$$



$$\therefore \hat{ABC} \approx 1.11^\circ$$

-1-

NYGB - SYNOPTIC PAPER A - QUESTION 9

a) BY LONG DIVISION OR MANIPULATION

$$\frac{x^2+3}{x-1} = \frac{x(x-1) + (x-1) + 4}{x-1} = \underline{x+1} + \frac{4}{x-1}$$

$$\begin{aligned} A &= 1 \\ B &= 1 \\ C &= 4 \end{aligned}$$

ALTERNATIVE BY COMPARING COEFFICIENTS

$$\frac{x^2+3}{x-1} \equiv Ax + B + \frac{C}{x-1}$$

$$\frac{x^2+3}{x-1} \equiv \frac{Ax(x-1) + B(x-1) + C}{x-1}$$

$$x^2+3 \equiv Ax^2 + (B-A)x + (C-B)$$

$$\begin{aligned} A &= 1 & B-A &= 0 & C-B &= 3 \\ & & B-1 &= 0 & C-1 &= 3 \\ & & B &= 1 & C &= 4 \end{aligned}$$

b) USING PART (a) WE HAVE

$$\int_2^4 \frac{x^2+3}{x-1} dx = \int_2^4 \left(x+1 + \frac{4}{x-1} \right) dx = \left[\frac{1}{2}x^2 + x + 4\ln|x-1| \right]_2^4$$

$$= (8+4+4\ln 3) - (2+2+4\ln 1)$$

$$= \underline{8 + 4\ln 3}$$

IYGB - SYNOPTIC PAPER A - QUESTION 10

START BY REDUCING THE DOUBLE ARGUMENTS

$$\Rightarrow \frac{\cos 2x}{1 + \cos 2x} = 1 - 2 \tan x$$

$$\Rightarrow \frac{\cos^2 x - \sin^2 x}{1 + (2 \cos^2 x - 1)} = 1 - 2 \tan x$$

$$\Rightarrow \frac{\cos^2 x - \sin^2 x}{2 \cos^2 x} = 1 - 2 \tan x$$

$$\Rightarrow \frac{\cos^2 x - \sin^2 x}{\cos^2 x} = 2 - 4 \tan x$$

$$\Rightarrow 1 - \tan^2 x = 2 - 4 \tan x$$

$$\Rightarrow 0 = 1 - 4 \tan x + \tan^2 x$$

- $\cos 2A \equiv \cos^2 A - \sin^2 A$
- $\cos 2A \equiv 2 \cos^2 A - 1$
- $\cos 2A \equiv 1 - 2 \sin^2 A$

THE QUADRATIC DOES NOT FACTORIZE NICELY, SO PROCEED BY THE QUADRATIC FORMULA OR BY COMPLETING THE SQUARE

$$\Rightarrow (\tan x - 2)^2 - 4 + 1 = 0$$

$$\Rightarrow (\tan x - 2)^2 = 3$$

$$\Rightarrow \tan x - 2 = \pm \sqrt{3}$$

$$\Rightarrow \tan x = \begin{cases} 2 + \sqrt{3} \\ 2 - \sqrt{3} \end{cases} \Rightarrow \arctan(2 \pm \sqrt{3}) = \begin{cases} \frac{5\pi}{12} \\ \frac{\pi}{12} \end{cases}$$

SOLVING SEPARATELY IN RADIAN

• $x = \frac{5\pi}{12} \pm n\pi$

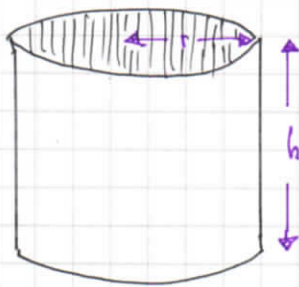
• $x = \frac{\pi}{12} \pm n\pi$ $n=0,1,2,3, \dots$

$x = \frac{\pi}{12}, \frac{5\pi}{12}, \frac{13\pi}{12}, \frac{17\pi}{12}$

-1-

IYGB - SYNOPTIC PAPER A - QUESTION 11

a)



$$\text{CAPACITY} = 1500$$

$$\Rightarrow \text{VOLUME} = 1500$$

$$\Rightarrow \pi r^2 h = 1500$$

$$\Rightarrow \pi r h = \frac{1500}{r}$$

$$A = \pi r^2 + 2\pi r h$$

↑
BASE

↑
CURVED SURFACE

$$\Rightarrow A = \pi r^2 + 2\pi r h$$

$$\Rightarrow A = \pi r^2 + 2(\pi r h)$$

$$\Rightarrow A = \pi r^2 + 2\left(\frac{1500}{r}\right)$$

$$\Rightarrow A = \pi r^2 + \frac{3000}{r}$$

AS REQUIRED

b)

DIFFERENTIATE THE "AREA" EXPRESSION WITH RESPECT TO r

$$\Rightarrow A = \pi r^2 + 3000r^{-1}$$

$$\Rightarrow \frac{dA}{dr} = 2\pi r - 3000r^{-2}$$

FOR STATIONARY VALUES $\frac{dA}{dr} = 0$

$$\Rightarrow 2\pi r - \frac{3000}{r^2} = 0$$

$$\Rightarrow 2\pi r = \frac{3000}{r^2}$$

LYGB - SYNOPTIC PAPER A - QUESTION 11

$$\Rightarrow 2\pi r^3 = 3000$$

$$\Rightarrow \pi r^3 = 1500$$

$$\Rightarrow r = \sqrt[3]{\frac{1500}{\pi}}$$

$$\Rightarrow \underline{r \approx 7.82 \text{ cm}}$$

c) USING THE SECOND DERIVATIVE TEST

$$\frac{dA}{dr} = 2\pi r - 3000r^{-2}$$

$$\frac{d^2A}{dr^2} = 2\pi + 6000r^{-3}$$

$$\left. \frac{d^2A}{dr^2} \right|_{r=7.82} = 2\pi + 6000(7.82\ldots)^{-3} = 6\pi > 0$$

INDEED THE MIN VALUE
OF A

d) FINALLY USING $A = \pi r^2 + \frac{3000}{r}$ WITH $r = 7.82$

$$A_{\text{MIN}} = \pi(7.82\ldots)^2 + \frac{3000}{(7.82\ldots)}$$

$$\underline{A_{\text{MIN}} \approx 576 \text{ cm}^2}$$

1YGB - SYNOPTIC PAPER A - QUESTION 12

- a) LOCATE THE MINIMUM OF THE QUADRATIC BY COMPLETING THE SQUARE

$$f(x) = x^2 - 2x - 3, \quad 0 \leq x \leq 5$$

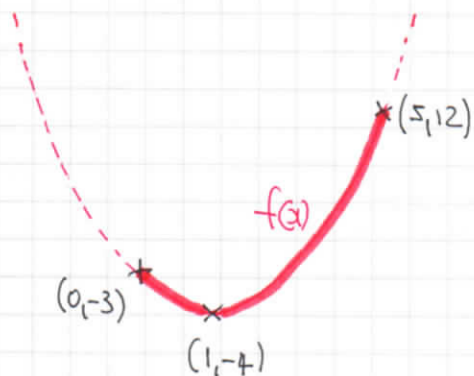
$$f(x) = (x-1)^2 - 1 - 3$$

$$f(x) = (x-1)^2 - 4$$

SKETCH THE FUNCTION f

∴ RANGE IS:

$$\underline{f(x) \in \mathbb{R}, -4 \leq f(x) \leq 12}$$



b)

$$f(x) = x^2 - 2x - 3, \quad 0 \leq x \leq 5$$

$$g(x) = ax^2 + 2, \quad x \in \mathbb{R}$$

$$g(f(1)) = 6$$

$$g(1^2 - 2 \times 1 - 3) = 6$$

$$g(-4) = 6$$

$$a(-4)^2 + 2 = 6$$

$$16a + 2 = 6$$

$$16a = 4$$

$$a = \frac{1}{4}$$

IYGB - SYNOPTIC PAPER A - QUESTION 13

SOLVING THE EQUATIONS SIMULTANEOUSLY

$$\left. \begin{aligned} y &= 2e^{-x} \\ y &= e^x - 1 \end{aligned} \right\} \Rightarrow e^x - 1 = 2e^{-x}$$
$$\Rightarrow e^x - 1 = \frac{2}{e^x}$$
$$\Rightarrow A - 1 = \frac{2}{A} \quad (A = e^x)$$
$$\Rightarrow A^2 - A = 2$$
$$\Rightarrow A^2 - A - 2 = 0$$
$$\Rightarrow (A+1)(A-2) = 0$$
$$\Rightarrow A = \begin{cases} -1 \\ 2 \end{cases}$$
$$\Rightarrow e^x = \begin{cases} -1 \\ 2 \end{cases}$$
$$\Rightarrow x = \ln 2$$

USING $e^x = 2$ INTO THE SECOND EQUATION YIELDS $y = 1$

$\therefore P(\ln 2, 1)$

ALTERNATIVE

$$\bullet y = 2e^{-x}$$

$$\Rightarrow \frac{y}{2} = e^{-x}$$

$$\Rightarrow \frac{2}{y} = e^x$$

$$\bullet y = e^x - 1$$

$$\Rightarrow e^x = y + 1$$

$$\Rightarrow \frac{2}{y} = y + 1$$

$$\Rightarrow 2 = y^2 + y$$

LYGB - SYNOPTIC PAPER A - QUESTION 13

$$\Rightarrow y^2 + y - 2 = 0$$

$$\Rightarrow (y-1)(y+2) = 0$$

$$\Rightarrow y = \begin{cases} 1 \\ -2 \end{cases}$$

$$e^x = y+1$$

$$e^x = \begin{cases} 2 \\ \times \end{cases}$$

$$x = \ln 2$$

Hence $\mathcal{P}(\ln 2, 1)$ is BIFOLD

1YGB - SYNOPTIC PAPER A - QUESTION 14a) IDENTIFYING THE TRANSFORMATIONS

- TRANSLATION BY 1 UNIT TO THE "RIGHT": $x \mapsto x-1$

$$4x(x-1) \mapsto 4(x-1)[(x-1)-1]$$

$$4(x-1)(x-2)$$

- HORIZONTAL STRETCH BY SCALE FACTOR $\frac{2}{3}$: $x \mapsto \frac{3}{2}x$

$$4(x-1)(x-2) \mapsto 4\left[\left(\frac{3}{2}x\right)-1\right]\left[\left(\frac{3}{2}x\right)-2\right]$$

$$4\left(\frac{3}{2}x-1\right)\left(\frac{3}{2}x-2\right)$$

$$4\left(\frac{9}{4}x^2 - 3x - \frac{3}{2}x + 2\right)$$

$$9x^2 - 12x - 6x + 8$$

$$\therefore \underline{g(x) = 9x^2 - 18x + 8}$$

b) IDENTIFYING AND REVERSING THE TRANSFORMATIONS

- REVERSING A VERTICAL STRETCH BY SCALE FACTOR OF 2

WE HAVE A VERTICAL STRETCH BY SCALE FACTOR $\frac{1}{2}$

$$4x(x-1) \mapsto \frac{1}{2}[4x(x-1)] = 2x(x-1)$$

- REVERSING A TRANSLATION BY 1 UNIT TO THE "RIGHT"

WE NEED A TRANSLATION BY 1 UNIT TO THE "LEFT"

$$2x(x-1) \mapsto 2(x+1)[(x+1)-1]$$

$$\mapsto 2x(x+1)$$

$$\therefore \underline{h(x) = 2x(x+1) = 2x^2 + 2x}$$

(YGB - SYNOPTIC PAPER A - QUESTION 15)

a)

COMPLETING THE SQUARE IN x & y SO ANSWER CAN BE READ

$$\Rightarrow x^2 + y^2 - 12x - 2y + 33 = 0$$

$$\Rightarrow x^2 - 12x + y^2 - 2y + 33 = 0$$

$$\Rightarrow (x-6)^2 - 6^2 + (y-1)^2 - 1^2 + 33 = 0$$

$$\Rightarrow (x-6)^2 - 36 + (y-1)^2 - 1 + 33 = 0$$

$$\Rightarrow (x-6)^2 + (y-1)^2 = 4$$

\therefore CENTRE AT (6,1) & RADIUS 2

b)

SOLVING SIMULTANEOUSLY WE OBTAIN

$$\Rightarrow (x-6)^2 + (y-1)^2 = 4$$

$$\Rightarrow (x-6)^2 + (x-3-1)^2 = 4 \quad (y=x-3)$$

$$\Rightarrow (x-6)^2 + (x-4)^2 = 4$$

$$\Rightarrow x^2 - 12x + 36 + x^2 - 8x + 16 = 4$$

$$\Rightarrow 2x^2 - 20x + 48 = 0$$

$$\Rightarrow x^2 - 10x + 24 = 0$$

$$\Rightarrow (x-6)(x-4) = 0$$

$$\Rightarrow x = \begin{cases} 4 \\ 6 \end{cases} \quad y = \begin{cases} 1 \\ 3 \end{cases}$$

\therefore P(4,1) & Q(6,3)

NYGB - SYNOPTIC PAPER A - QUESTION 15

c) START BY DRAWING A DIAGRAM

● DISTANCE PQ

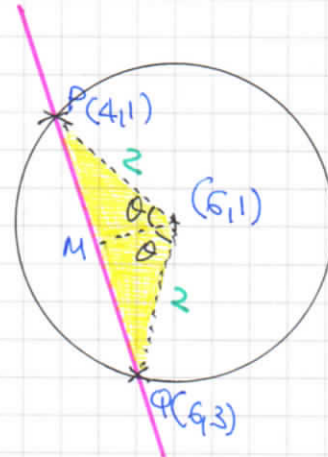
$$\begin{aligned} |PQ| &= \sqrt{(1-3)^2 + (4-6)^2} \\ &= \sqrt{4+4} \\ &= \sqrt{8} = 2\sqrt{2} \end{aligned}$$

● BY THE COSINE RULE OR SIMPLY TRIGONOMETRY

$$\sin \theta = \frac{|MP|}{2}$$

$$\sin \theta = \frac{\sqrt{2}}{2}$$

$$\theta = 45^\circ = \frac{\pi}{4}$$



● AREA OF SECTOR IS $\frac{1}{2}r^2\theta^c$

$$\frac{1}{2} \times 2^2 \times \frac{\pi}{2} = \pi$$

↑
2θ

● AREA OF TRIANGLE IN YELLOW

$$\frac{1}{2} \times 2 \times 2 \times \sin(2\theta) = 2 \sin \frac{\pi}{2} = 2$$

● REQUIRED AREA = AREA OF SECTOR - AREA OF TRIANGLE

$$= \pi - 2$$

AS REQUIRED

1YGB - SYNOPTIC APPR A - QUESTION 16

SOLVING SIMULTANEOUSLY

$$x^2 - \frac{1}{2}y^2 = 1 \quad y = x + c$$

\Rightarrow

\Leftarrow

$$x^2 - \frac{1}{2}(x+c)^2 = 1$$

$$\Rightarrow 2x^2 - (x+c)^2 = 2$$

$$\Rightarrow 2x^2 - (x^2 + 2cx + c^2) - 2 = 0$$

$$\Rightarrow 2x^2 - x^2 - 2cx - c^2 - 2 = 0$$

$$\Rightarrow x^2 - 2cx - (c^2 + 2) = 0$$

NOW USING THE DISCRIMINANT WITH $A=1$, $B=-2c$, $C=-(c^2+2)$

$$\Rightarrow B^2 - 4AC = (-2c)^2 - 4 \times 1 \times [-c^2 - 2]$$

$$= 4c^2 + 4c^2 + 8$$

$$= 8c^2 + 8$$

$$= \geq 8$$

AS THE DISCRIMINANT IS POSITIVE (AT LEAST 8) FOR ALL VALUES OF C THE CURVE & LINE INTERSECT REGARDLESS

LYGB - SYNOPTIC PAPER A - QUESTION 17

$$5 \frac{dy}{dx} = 2y^2 - 7y + 3$$

START BY SEPARATING VARIABLES

$$\Rightarrow 5 dy = (2y^2 - 7y + 3) dx$$

$$\Rightarrow \frac{5}{2y^2 - 7y + 3} dy = 1 dx$$

$$\Rightarrow \frac{5}{(2y-1)(y-3)} dy = 1 dy$$

PARTIAL FRACTIONS ON THE L.H.S OF THE O.D.E

$$\Rightarrow \frac{5}{(2y-1)(y-3)} \equiv \frac{P}{2y-1} + \frac{Q}{y-3}$$

$$\Rightarrow \boxed{5 \equiv P(y-3) + Q(2y-1)}$$

- IF $y=3 \Rightarrow 5 = 5Q$
 $\Rightarrow Q = 1$

- IF $y=0 \Rightarrow 5 = -3P - Q$
 $\Rightarrow 5 = -3P - 1$
 $\Rightarrow 3P = -6$
 $\Rightarrow P = -2$

RETURNING TO THE O.D.E

$$\Rightarrow \int \frac{1}{y-3} - \frac{2}{2y-1} dy = \int 1 dx$$

IYGB - SYNOPSIS PAPER A - QUESTION 17

$$\Rightarrow \ln|y-3| - \ln|2y-1| = x + C$$

$$\Rightarrow \ln \left| \frac{y-3}{2y-1} \right| = x + C$$

$$\Rightarrow \frac{y-3}{2y-1} = e^{x+C}$$

$$\Rightarrow \frac{y-3}{2y-1} = Ae^x, \quad \text{WHERE } A = e^C$$

$$\Rightarrow y-3 = 2Aye^x - Ae^x$$

$$\Rightarrow Ae^x - 3 = 2Aye^x - y$$

$$\Rightarrow Ae^x - 3 = y(2Ae^x - 1)$$

$$\Rightarrow y = \frac{Ae^x - 3}{2Ae^x - 1}$$

AS REQUIRED

1 YGB - SYNOPTIC PAPER A - QUESTION 10IF IN ARITHMETIC PROGRESSION, IN THE ORDER GIVEN

$$\Rightarrow \frac{\pi}{4} - \theta = \phi - \frac{\pi}{4}$$

$$\Rightarrow \phi + \theta = \frac{\pi}{2}$$

NOW WE HAVE

$$\begin{aligned} & (\sin\theta - \sin\phi)^2 + (\cos\theta + \cos\phi)^2 \\ &= \sin^2\theta - 2\sin\theta\sin\phi + \sin^2\phi + \cos^2\theta + 2\cos\theta\cos\phi + \cos^2\phi \\ &= (\sin^2\theta + \cos^2\theta) + (\sin^2\phi + \cos^2\phi) + 2[\cos\theta\cos\phi - \sin\theta\sin\phi] \\ &= 2 + 2[\cos\theta\cos\phi - \sin\theta\sin\phi] \\ &= 2 + 2[\cos(\theta + \phi)] \\ &= 2 + 2\cos\frac{\pi}{2} \\ &= 2 \end{aligned}$$

~~2~~
i.e. $k = 2$

IYGB - SYNOPTIC PAPER A - QUESTION 19

a) i)

$$x = a + \tan t$$

$$\frac{dx}{dt} = \sec^2 t$$

$$\frac{dx}{dt} = \frac{1}{\cos^2 t}$$

$$y = b + \cot^2 t$$

$$\frac{dy}{dt} = 2 \cot t (-\operatorname{cosec}^2 t)$$

$$\frac{dy}{dt} = -\frac{2 \cot t}{\sin^2 t}$$

$$\frac{dy}{dt} = -2 \frac{\cos t}{\sin t} \cdot \frac{1}{\sin^2 t}$$

$$\frac{dy}{dt} = -\frac{2 \cos t}{\sin^3 t}$$

Tips

$$\frac{dy}{dx} = \frac{dy/dt}{dx/dt} = \frac{-\frac{2 \cos t}{\sin^3 t}}{\frac{1}{\cos^2 t}} = -\frac{2 \cos^3 t}{\sin^3 t} = \underline{\underline{-2 \cot^3 t}}$$

ii)

$$x = a + \tan t$$

$$x - a = \tan t$$

$$\tan^2 t = (x - a)^2$$

$$y = b + \cot^2 t$$

$$y - b = \cot^2 t$$

$$\tan^2 t = \frac{1}{y - b}$$

$$(x - a)^2 = \frac{1}{y - b}$$

$$\underline{\underline{(x - a)^2 (y - b) = 1}}$$

YGB - SYNOPTIC PAPER A - QUESTION 19

b)

STARTING WITH THE LINE WE HAVE

$y = 6x + 2$		$y = 6x + 2$
$2 = 6x + 2$		$5 = 6x + 2$
$6x = 0$		$3 = 6x$
$x = 0$		$x = \frac{1}{2}$
$\therefore (0, 2)$		$\therefore (\frac{1}{2}, 5)$

NOW USING THE CARTESIAN EQUATION OF C WITH EACH OF THE ABOVE POINTS

$$\left. \begin{aligned} (0, 2) &\Rightarrow (2-b)a^2 = 1 \\ (\frac{1}{2}, 5) &\Rightarrow (5-b)(\frac{1}{2}-a)^2 = 1 \end{aligned} \right\} \Rightarrow$$

$$\Rightarrow \left. \begin{aligned} 2-b &= \frac{1}{a^2} \\ 5-b &= \frac{1}{(\frac{1}{2}-a)^2} \end{aligned} \right\} \text{SUBTRACTING}$$

$$\Rightarrow -3 = \frac{1}{a^2} - \frac{1}{(\frac{1}{2}-a)^2}$$

$$\Rightarrow 3 = \frac{1}{(\frac{1}{2}-a)^2} - \frac{1}{a^2}$$

$$\Rightarrow 3 = \frac{4}{(1-2a)^2} - \frac{1}{a^2}$$

$$\Rightarrow 3(1-2a)^2 a^2 = 4a^2 - (1-2a)^2$$

$$\Rightarrow 3a^2(4a^2 - 4a + 1) = 4a^2 - (4a^2 - 4a + 1)$$

$$\Rightarrow 12a^4 - 12a^3 + 3a^2 = 4a - 1$$

1YGB - SYNOPTIC PAPER A - QUESTION 19

$$\Rightarrow 12a^4 - 12a^3 + 3a^2 - 4a + 1 = 0$$

BY INSPECTION $a=1$ IS A SOLUTION - LONG DIVISION

OR ALGEBRAIC MANIPULATION

$$\Rightarrow 12a^3(a-1) + 3a(a-1) - (a-1) = 0$$

$$\Rightarrow \underline{(a-1)(12a^3 + 3a - 1)}$$

d $a=1$ & USING $2-b = \frac{1}{a^2}$

$$2-b = 1$$

$$\underline{b=1}$$

1YGB - SYNOPTIC PAPER A - QUESTION 20

START BY OBTAINING THE GRADIENT FUNCTION

$$\Rightarrow y = x (\ln x)^{\frac{1}{2}}$$

$$\Rightarrow \frac{dy}{dx} = 1 \times (\ln x)^{\frac{1}{2}} + x \times \frac{1}{2} (\ln x)^{-\frac{1}{2}} \times \frac{1}{x}$$

$$\Rightarrow \frac{dy}{dx} = (\ln x)^{\frac{1}{2}} + \frac{1}{2} (\ln x)^{-\frac{1}{2}}$$

$$\Rightarrow \frac{dy}{dx} = \sqrt{\ln x} + \frac{1}{2\sqrt{\ln x}}$$

NOW WE ARE GIVEN THAT THE EQUATION OF THE TANGENT, AT THE POINT WHERE $x = a$ IS $4y = bx - a$

THIS LEADS TO TWO EQUATIONS

● $P(a, a\sqrt{\ln a})$ MUST SATISFY THE CURVE AND THE TANGENT

● $\left. \frac{dy}{dx} \right|_{x=a} = \sqrt{\ln a} + \frac{1}{2\sqrt{\ln a}}$

● THE GRADIENT OF THE TANGENT IS $\frac{b}{4}$ (BY INSPECTION)

THUS WE NOW HAVE

$$\sqrt{\ln a} + \frac{1}{2\sqrt{\ln a}} = \frac{b}{4}$$

$\underbrace{\hspace{10em}}$
GRADIENT AT P

\uparrow
GRADIENT OF TANGENT

AND

$$4y = bx - a$$

$$4a\sqrt{\ln a} = ba - a$$

$$4\sqrt{\ln a} = b - 1$$

$$\sqrt{\ln a} = \frac{b}{4} - \frac{1}{4}$$

$$\frac{b}{4} = \frac{1}{4} + \sqrt{\ln a}$$

LYGB - SYNOPTIC PAPER A - QUESTION 20

BY SUBSTITUTION WE GET

$$\Rightarrow \cancel{\sqrt{\ln a}} + \frac{1}{2\sqrt{\ln a}} = \frac{1}{4} + \cancel{\sqrt{\ln a}}$$

$$\Rightarrow 2\sqrt{\ln a} = 4$$

$$\Rightarrow \sqrt{\ln a} = 2$$

$$\Rightarrow \ln a = 4$$

$$\Rightarrow a = e^4$$

IYGB - SYNOPTIC PAPER A - QUESTION 21

$$\int \frac{1-x}{\sqrt{x}(x+1)^2} dx = \dots$$

USING THE GIVEN SUBSTITUTION

$$\begin{aligned} \sqrt{x} &= \tan \theta \\ x &= \tan^2 \theta \\ dx &= 2 \tan \theta \sec^2 \theta \end{aligned}$$

$$\begin{aligned} \dots &= \int \frac{1 - \tan^2 \theta}{\cancel{\tan \theta} (\tan^2 \theta + 1)^2} (2 \cancel{\tan \theta} \sec^2 \theta d\theta) \\ &= \int \frac{2 \sec^2 \theta (1 - \tan^2 \theta)}{(\sec^2 \theta)^2} d\theta \\ &= \int \frac{2 \sec^2 \theta (1 - \tan^2 \theta)}{\sec^2 \theta} d\theta \\ &= \int \frac{2(1 - \tan^2 \theta)}{\sec^2 \theta} d\theta \end{aligned}$$

CONVERT THE INTEGRAL INTO $\sec \theta$, SO IT MAY BE SPLIT

$$\begin{aligned} &= \int \frac{2[1 - (\sec^2 \theta - 1)]}{\sec^2 \theta} d\theta \\ &= \int \frac{2(2 - \sec^2 \theta)}{\sec^2 \theta} d\theta \\ &= \int 2 \left(\frac{2}{\sec^2 \theta} - \frac{\sec^2 \theta}{\sec^2 \theta} \right) d\theta \\ &= \int 2 [2 \cos^2 \theta - 1] d\theta \\ &= \int 2 \cos 2\theta d\theta \\ &= \sin 2\theta + C \end{aligned}$$

$$\cos 2\theta = 2\cos^2 \theta - 1$$

LYGB - SYNOPTIC PAPER A - QUESTION 21

$$= 2\sin\theta\cos\theta + C$$

$$= \frac{2\sin\theta}{\cos\theta} \times \cos^2\theta + C$$

$$= 2\tan\theta \times \frac{1}{\sec^2\theta} + C$$

$$= \frac{2\tan\theta}{1 + \tan^2\theta} + C$$

$$= \frac{2\sqrt{x}}{1+x} + C$$