

# IYGB GCE

## Mathematics SYN

### Advanced Level

#### Synoptic Paper I

Difficulty Rating: 3.9625/0.6871

**Time: 3 hours**

**Candidates may use any calculator allowed by the regulations of this examination.**

#### **Information for Candidates**

---

This synoptic practice paper follows closely the Advanced Level Pure Mathematics Syllabus, suitable for first assessment Summer 2018.

The standard booklet “Mathematical Formulae and Statistical Tables” may be used.

Full marks may be obtained for answers to ALL questions.

The marks for the parts of questions are shown in round brackets, e.g. (2).

There are 23 questions in this question paper.

The total mark for this paper is 200.

#### **Advice to Candidates**

---

You must ensure that your answers to parts of questions are clearly labelled.

You must show sufficient working to make your methods clear to the Examiner.

Answers without working may not gain full credit.

Non exact answers should be given to an appropriate degree of accuracy.

The examiner may refuse to mark any parts of questions if deemed not to be legible.

**Question 1**

The variables  $x$  and  $y$  are thought to obey a law of the form

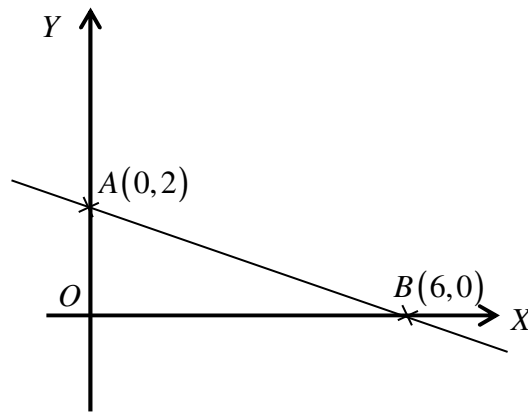
$$y = ax^n,$$

where  $a$  and  $n$  are non zero constants.

Let  $X = \log_{10} x$  and  $Y = \log_{10} y$ .

- a) Show there is a linear relationship between  $X$  and  $Y$ . (4)

The figure below shows the graph of  $Y$  against  $X$ .



- b) Determine the value of  $a$  and the value of  $n$ . (3)
- 

**Question 2**

A curve  $C$  is defined implicitly by

$$(x + y)^3 = 27x, \quad x, y \in \mathbb{R}.$$

Verify that the point on  $C$  where  $x = 1$  is a stationary point. (7)

---

**Question 3**

The straight line  $l_1$  has equation  $2x + y - 18 = 0$  and crosses the  $x$  axis at the point  $P$ .

The straight line  $l_2$  is parallel to  $l_1$  and passes through the point  $Q(-4, 6)$ .

The point  $R$  is the  $x$  intercept of  $l_2$ .

- a) Determine the coordinates of  $P$  and  $R$ . (5)

The point  $S$  lies on  $l_1$  so that  $RS$  is perpendicular to  $l_1$ .

- b) Calculate the area of the triangle  $PRS$ . (7)
- 

**Question 4**

Solve the differential equation

$$\frac{dy}{dx} = 4xy - 3yx^2$$

subject to the condition  $y = 1$  at  $x = 2$ , giving the answer in the form  $y = f(x)$ . (7)

---

**Question 5**

$$f(x) \equiv x^2 - 4\sqrt{3}x - 15, \quad x \in \mathbb{R}.$$

- a) Express  $f(x)$  in the form  $f(x) = (x+a)^2 + b$ , where  $a$  and  $b$  are constants. (3)

- b) Hence find the exact solutions of the equation  $f(x) = 0$ . (4)
-

**Question 6**

A liquid is cooling down and its temperature  $\theta$  °C satisfies

$$\theta = 20 + 30e^{-\frac{t}{20}}, t \geq 0$$

where  $t$  is the time in minutes after a given instant.

Find the value of  $t$  when the temperature of the liquid has reduced to half its initial temperature. (7)

---

**Question 7**

Given that  $k$  and  $A$  are constants with  $k > 0$ , then

$$(2 - kx)^8 \equiv 256 + Ax + 1008x^2 + \dots$$

Find the value of  $k$  and the value of  $A$ . (7)

---

**Question 8**

The points  $A$  and  $B$  have coordinates  $(-1, 2)$  and  $(1, 8)$ , respectively.

a) Show that the equation of the perpendicular bisector of  $AB$  is

$$3y + x = 15. \quad (5)$$

The points  $A$  and  $B$  lie on a circle whose centre is at  $C(3, k)$ .

b) Determine an equation for the circle. (5)

---

**Question 9**

Simplify, showing clearly all the workings, the trigonometric expression

$$\cos^3 \theta \sin \theta - \sin^3 \theta \cos \theta,$$

giving the final answer in the form  $A \sin k\theta$ , where  $A$  and  $k$  are constants. (6)

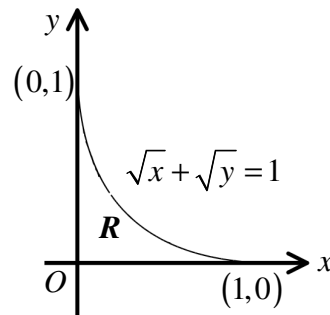
---

**Question 10**

Relative to a fixed origin, the coordinates of three points  $A(1,1,1)$ ,  $B(4,-1,3)$  and  $C(2,5,-1)$ , are given.

Find the position vector of the point  $P$  if  $4\overrightarrow{PA} + 3\overrightarrow{PB} = 5\overrightarrow{PC}$ . (6)

---

**Question 11**

The figure above shows the curve with equation

$$\sqrt{x} + \sqrt{y} = 1, \quad x \in \mathbb{R}, \quad 0 \leq x \leq 1.$$

The curve meets the coordinate axes at the points  $(1,0)$  and  $(0,1)$ .

The finite region  $R$  is bounded by the curve and the coordinate axes.

Show that the area of  $R$  is  $\frac{1}{6}$ . (8)

---

**Question 12**

Given that

$$y = 3 \cos(\ln x) + 2 \sin(\ln x), \quad x > 0,$$

show clearly that

$$x^2 \frac{d^2 y}{dx^2} + x \frac{dy}{dx} = Ay,$$

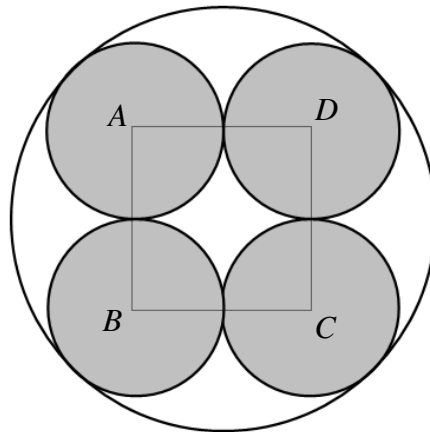
stating the value of the constant  $A$ .

**(10)**

**Question 13**

Four circles are touching in such a way so that their centres form the corners of a square  $ABCD$ . These four circles are circumscribed by a larger circle.

This is shown in the figure below.



Show, by detailed workings, that the ratio of the total area of the four smaller circles to the area of the larger circle is given by

$$12 - 8\sqrt{2} : 1$$

**(10)**

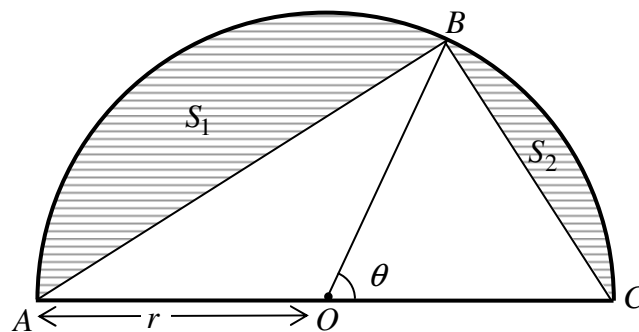
Question 14

$$y = \frac{1}{3\sqrt{x}} \left[ \frac{2}{x} - 3 \right], \quad x > 0.$$

Find the range of values of  $x$  for which  $y$  is decreasing. (8)

---

Question 15



The figure above shows a semicircle of radius  $r$  cm, where  $AOC$  is a diameter with point  $O$  the centre of the semicircle.

The point  $B$  lies on the circular part of the semicircle so that the angle  $BOC$  is  $\theta$  radians.

The chords  $AB$  and  $BC$  define two segments  $S_1$  and  $S_2$ , respectively.

Given that the area of  $S_1$  is four times as large as the area of  $S_2$ , show that

$$\pi + 3 \sin \theta = 5\theta. \quad (7)$$


---

**Question 16**

$$f(x) = \frac{x-2}{x+2}, \quad x \in \mathbb{R}.$$

Use the formal definition of the derivative as a limit, to show that

$$f'(x) = \frac{4}{(x+2)^2}. \quad (7)$$


---

**Question 17**

Prove that if 1 is added to the product of any 4 consecutive positive integers, the resulting number will always be a square number. (7)

---

**Question 18**

A solid right circular cone has radius  $x$  cm and perpendicular height  $6x$  cm.

The cone is heated so that the area of its circular base is expanding at the constant rate of  $0.25 \text{ cm}^2 \text{ s}^{-1}$ .

Find the rate at which the volume of the cone is increasing, when the radius of the base of the cone has reached 2.5 cm.

*(You may assume that the bolt is expanding uniformly when heated)*

$$\left[ \text{volume of a cone of radius } r \text{ and height } h \text{ is given by } \frac{1}{3}\pi r^2 h \right] \quad (6)$$


---

**Question 19**

Solve the following exponential equation, giving the answers correct to 3 s.f., where appropriate.

$$3^{t+1} = 6 + 3^{2t-1} \quad (8)$$


---



**Question 20**

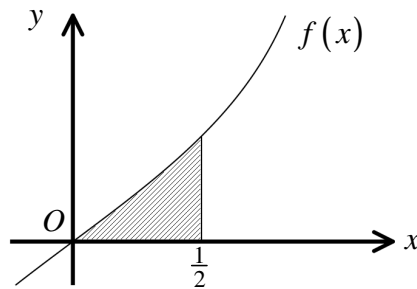
The function  $f$  is defined as

$$f(x) = \ln\left(\frac{1+x}{1-x}\right), \quad |x| < 1.$$

- a) Show that  $f(x)$  is an odd function. (3)
- b) Find an expression for  $f'(x)$  as a single simplified fraction, showing further that  $f'(x)$  is an even function. (6)
- c) Determine an expression for  $f^{-1}(x)$ . (5)
- d) Use the substitution  $u = e^x + 1$  to find the exact value of

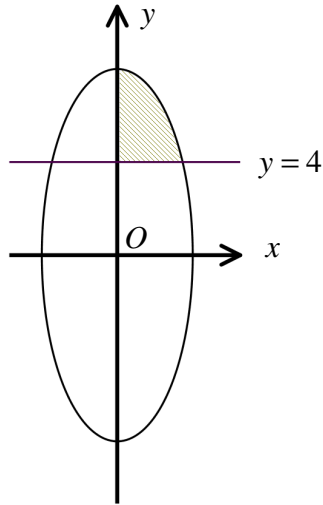
$$\int_0^{\ln 3} f^{-1}(x) \, dx. \quad (8)$$

The figure below shows part of the graph of  $f(x)$ .



- e) Find an exact value for the area of the shaded region, bounded by  $f(x)$ , the coordinate axes and the straight line with equation  $x = \frac{1}{2}$ . (3)
-

## Question 21



A curve is defined in terms of a parameter  $\theta$ , by the following equations.

$$x = \cos \theta, \quad y = 8 \sin \theta, \quad 0 \leq \theta < 2\pi.$$

Determine an exact value for the area of the finite region bounded by the curve, the  $y$  axis for which  $y \geq 0$ , and the straight line with equation  $y = 4$  for which  $y \geq 4$ . (10)

## Question 22

It is given that

$$S_n = \sum_{k=1}^n \left[ \sum_{r=1}^k (2^r) \right].$$

Show that

$$S_n = 2^{n+2} - 2n - 4. \quad (9)$$

**Question 23**

By changing the base of the logarithmic integrand into base e and further using integration by parts, show that

$$\int_1^e \log_{10} x \, dx = \frac{1}{\ln 10}. \quad (9)$$

---