

1YGB- SYNOPTIC PAPER J - QUESTION 1

DIFFERENTIATING IMPLICITLY W.R.T x

$$\Rightarrow 2 \ln y = x \ln x$$

$$\Rightarrow \frac{d}{dx}(2 \ln y) = \frac{d}{dx}(x \ln x)$$

$$\Rightarrow 2 \times \frac{1}{y} \frac{dy}{dx} = 1 \times \ln x + x \times \frac{1}{x}$$

$$\Rightarrow \frac{2}{y} \frac{dy}{dx} = 1 + \ln x$$

$$\Rightarrow \frac{dy}{dx} = \frac{1}{2} y (1 + \ln x)$$

NOW WITHIN $x=4$

$$2 \ln y = 4 \ln 4$$

$$\ln y = 2 \ln 4$$

$$\ln y = \ln 16$$

$$y = 16$$

FINALLY WE OBTAIN

$$\left. \frac{dy}{dx} \right|_{(4,16)} = \frac{1}{2} \times 16 \times (1 + \ln 4) = \underline{8(1 + \ln 4)} = \underline{8(1 + 2 \ln 2)}$$

ALTERNATIVE BY REARRANGING FIRST

$$\Rightarrow 2 \ln y = x \ln x$$

$$\Rightarrow \ln y = \frac{1}{2} x \ln x$$

$$\Rightarrow e^{\ln y} = e^{\frac{1}{2} x \ln x}$$

$$\Rightarrow y = e^{\frac{1}{2} x \ln x}$$

LYGB - SYNOPTIC PAPER J - QUESTION 1

NOW DIFFERENTIATING W.R.T a

$$\Rightarrow \frac{dy}{dx} = e^{\frac{1}{2}a \ln a} \times \left(\frac{1}{2} \ln a + \frac{1}{2} a \times \frac{1}{a} \right)$$

$$\Rightarrow \frac{dy}{dx} = e^{\frac{1}{2}a \ln a} \times \left(\frac{1}{2} \right)$$

$$\Rightarrow \left. \frac{dy}{dx} \right|_{a=4} = e^{2 \ln 4} \times \left(\frac{1}{2} \ln 4 + \frac{1}{2} \right)$$

$$= e^{\ln 16} \times \frac{1}{2} (1 + \ln 4)$$

$$= 16 \times \frac{1}{2} (1 + 2 \ln 2)$$

$$= \underline{8 (1 + 2 \ln 2)}$$

~~AS BEFORE~~

- 1 -

YGB - SYNOPSIS PAPER J - QUESTION 2.

METHOD A - BY PARTIAL FRACTIONS

$$\frac{7x+2}{(x-2)(x+2)(2x+1)} \equiv \frac{A}{x-2} + \frac{B}{x+2} + \frac{C}{2x+1}$$

$$\boxed{7x+2 \equiv A(x+2)(2x+1) + B(x-2)(2x+1) + C(x+2)(x-2)}$$

- IF $x=2 \Rightarrow 16 = A \times 4 \times 5$
 $\Rightarrow 16 = 20A$
 $\Rightarrow A = \frac{4}{5}$
- IF $x=-2 \Rightarrow -12 = B(-4)(-3)$
 $\Rightarrow -12 = 12B$
 $\Rightarrow B = -1$
- IF $x = -\frac{1}{2} \Rightarrow -\frac{3}{2} = C\left(\frac{3}{2}\right)\left(-\frac{5}{2}\right)$
 $\Rightarrow -\frac{3}{2} = -\frac{15}{4}C$
 $\Rightarrow C = \frac{2}{5}$

$$\therefore y = \frac{4}{5}(x-2)^{-1} - (x+2)^{-1} + \frac{2}{5}(2x+1)^{-1}$$

$$\frac{dy}{dx} = -\frac{4}{5}(x-2)^{-2} + (x+2)^{-2} - \frac{2}{5}(2x+1)^{-2} \times 2$$

$$\frac{dy}{dx} = -\frac{4}{5(x-2)^2} + \frac{1}{(x+2)^2} - \frac{4}{5(2x+1)^2}$$

$$\left. \frac{dy}{dx} \right|_{x=-1} = -\frac{4}{5 \times 9} + \frac{1}{4} - \frac{4}{5 \times 1}$$

$$\left. \frac{dy}{dx} \right|_{x=-1} = -\frac{4}{45} + \frac{1}{4} - \frac{4}{5}$$

$$\left. \frac{dy}{dx} \right|_{x=-1} = \frac{1}{9}$$

NGB - SYNOPTIC PAPER 1 - QUESTION 2

ALTERNATIVE BY IMPLICIT DIFFERENTIATION (LOGARITHMIC)

$$y = \frac{7x+2}{(x-2)(x+2)(2x+1)}$$

$$\ln y = \ln \left[\frac{7x+2}{(x-2)(x+2)(2x+1)} \right]$$

$$\ln y = \ln(7x+2) - \ln(x-2) - \ln(x+2) - \ln(2x+1)$$

Diff WITH RESPECT TO x

$$\frac{1}{y} \frac{dy}{dx} = \frac{7}{7x+2} - \frac{1}{x-2} - \frac{1}{x+2} - \frac{2}{2x+1}$$

$$\frac{dy}{dx} = y \left[\frac{7}{7x+2} - \frac{1}{x-2} - \frac{1}{x+2} - \frac{2}{2x+1} \right]$$

FIND FIRST y AT x = -1

$$y \Big|_{x=-1} = \frac{-5}{(-3)(1)(-1)} = \frac{-5}{3} = -\frac{5}{3}$$

FINALLY AT x = -1

$$\frac{dy}{dx} \Big|_{x=-1} = -\frac{5}{3} \left[\frac{7}{-5} - \frac{1}{-3} - 1 - \frac{2}{-1} \right]$$

$$= -\frac{5}{3} \times \left[-\frac{7}{5} + \frac{1}{3} - 1 + 2 \right]$$

$$= -\frac{5}{3} \times \left(-\frac{1}{15} \right)$$

$$= \frac{1}{9}$$

~~AS BEFORE~~

YGB - SYNOPTIC PAGE J - QUESTION 3

$$S_n = 2n(4n-7) \quad n \in \mathbb{N}$$

THE FIFTH TERM SATISFIES

$$u_5 = S_5 - S_4$$

$$u_5 = 2 \times 5 \times (20-7) - 2 \times 4 \times (16-7)$$

$$u_5 = 130 - 72$$

$$u_5 = 58$$

1YGB - SYNOPSIS PART 1 - QUESTION 4

PROCEED AS FOLLOWS

$$\Rightarrow f(x) = \frac{(1-x)^2}{\sqrt{1+2x}} = (1-x)^2 (1+2x)^{-\frac{1}{2}}$$

$$\Rightarrow f(x) = (1-2x+x^2) \left[1 + \frac{-\frac{1}{2}}{1}(2x)^1 + \frac{-\frac{1}{2}(-\frac{3}{2})}{1 \times 2}(2x)^2 + \frac{-\frac{1}{2}(-\frac{3}{2})(-\frac{5}{2})}{1 \times 2 \times 3}(2x)^3 + o(x^4) \right]$$

$$\Rightarrow f(x) = (1-2x+x^2) \left[1 - x + \frac{3}{2}x^2 - \frac{5}{2}x^3 + o(x^4) \right]$$

MULTIPLYING FOLLOWS

$$\Rightarrow f(x) = \begin{array}{r} 1 - x + \frac{3}{2}x^2 - \frac{5}{2}x^3 + o(x^4) \\ -2x + 2x^2 - 3x^3 + o(x^4) \\ \quad x^2 - x^3 + o(x^4) \\ \hline \end{array}$$

$$\Rightarrow \underline{f(x) = 1 - 3x + \frac{9}{2}x^2 - \frac{13}{2}x^3 + o(x^4)}$$

~~As required~~

LYGB - SYNOPTIC PAPER J - QUESTION 5

a) STARTING WITH A DIAGRAM - FILL IN ALL THE MISSING ANGLES

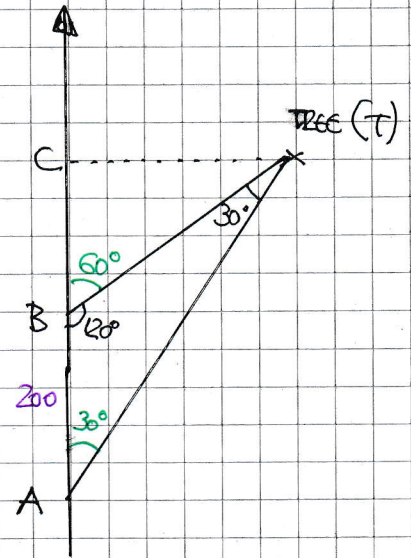
- GIVENLY AS $\triangle ABT$ IS ISOSCELES, $|BT| = 200$
- BY SIMPLE TRIGONOMETRY ON $\triangle BCT$

$$\frac{|CT|}{|BT|} = \sin 60^\circ$$

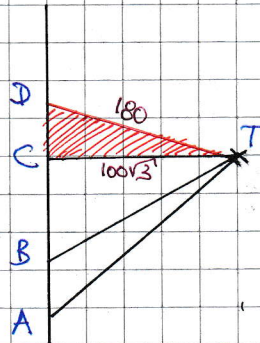
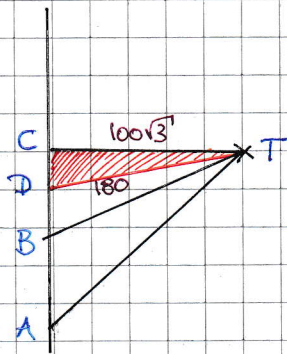
$$|CT| = |BT| \sin 60^\circ$$

$$|CT| = 200 \times \frac{\sqrt{3}}{2}$$

$$|CT| = 100\sqrt{3} \approx 173$$



b) THERE ARE TWO CASES TO CONSIDER



- IN EITHER CASE FROM THE ORIGINAL DIAGRAM BY TRIGONOMETRY OR PYTHAGORAS

$$|BC|^2 + |CT|^2 = |BT|^2$$

$$|BC|^2 + (100\sqrt{3})^2 = 200^2$$

$$|BC|^2 + 30000 = 40000$$

$$|BC| = 100$$

IYGB - SYNOPTIC PAPER J - QUESTION 5

TH/M BY PYTHAGORAS, WORKING AT THE ORANGE/PAD TRIANGLE
IN EACH CASE

$$|CD|^2 + |CT|^2 = |DT|^2$$

$$|CD|^2 + (100\sqrt{3})^2 = 180^2$$

$$|CD|^2 + 30000 = 32400$$

$$|CD|^2 = 2400$$

$$|CD| = 20\sqrt{6} \approx 48.98$$

HENCE WE OBTAIN

$$|AD| = \begin{cases} |AB| + |BC| - |CD| = 200 + 100 - 20\sqrt{6} \\ |AB| + |BC| + |CD| = 200 + 100 + 20\sqrt{6} \end{cases}$$

$$|AD| = \begin{cases} 300 - 20\sqrt{6} \approx 251 \\ 300 + 20\sqrt{6} \approx 349 \end{cases}$$

LYGB - SYNOPTIC PAPER J - QUESTION 6

a)

$$f(x) = \frac{3x+1}{x+4}, \quad x \in \mathbb{R}, \quad x > -4$$

$$\Rightarrow y = \frac{3x+1}{x+4}$$

$$\Rightarrow y(x+4) = 3x+1$$

$$\Rightarrow yx + 4y = 3x + 1$$

$$\Rightarrow yx - 3x = 1 - 4y$$

$$\Rightarrow x(y-3) = 1 - 4y$$

$$\Rightarrow x = \frac{1-4y}{y-3}$$

$$\therefore f^{-1}(x) = \frac{1-4x}{x-3} \quad \text{OR} \quad f^{-1}(x) = \frac{4x-1}{3-x}$$

b)

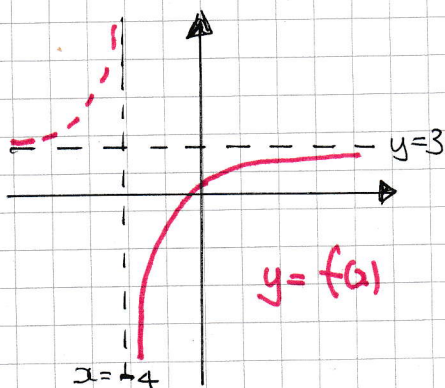
FIRSTLY OBTAIN THE RANGE OF $f(x)$ VIA A QUICK SKETCH

• VERTICAL ASYMPTOTE: $x = -4$ (DENOMINATOR ZERO)

• HORIZONTAL ASYMPTOTE: $y = 3$ $\left[\lim_{x \rightarrow \infty} \left(\frac{3x+1}{x+4} \right) = 3 \right]$

• $x = 0 \Rightarrow y = \frac{1}{4}$

• HENCE WE SKETCH



\therefore RANGE OF $f(x)$ IS
 $f(x) < 3$

IXGB - SYNOPSIS PAPER J - QUESTION 6

THUS WE HAVE

	$f(x)$	$f^{-1}(x)$
DOMAIN	$x > -4$ (given)	<u>$x < 3$</u>
RANGE	$f(x) < 3$	<u>$f^{-1}(x) > -4$</u>

c)

FIRSTLY OBTAIN AN EXPRESSION FOR THE COMPOSITION

$$\bullet f(g(x)) = f(e^x - 3) = \frac{3(e^x - 3) + 1}{(e^x - 3) + 4} = \frac{3e^x - 8}{e^x + 1}$$

$$\bullet f(g(x)) = \frac{4}{5}$$

$$\Rightarrow \frac{3e^x - 8}{e^x + 1} = \frac{4}{5}$$

$$\Rightarrow 15e^x - 40 = 4e^x + 4$$

$$\Rightarrow 11e^x = 44$$

$$\Rightarrow e^x = 4$$

$$\Rightarrow x = \ln 4$$

$$\Rightarrow \underline{x = 2 \ln 2}$$

“ACCEPTED” BY $f(g(x))$

YGB - SYNOPTIC PAPER J - QUESTION 7

a) START BY DIFFERENTIATING THE EXPRESSION W.R.T t

$$N = Ae^{kt}$$

$$\frac{dN}{dt} = Ake^{kt} \quad \text{OR} \quad \frac{dN}{dt} = kN$$

• $t = \ln 64 \quad N = 1200$

$$1200 = Ae^{k \ln 64}$$



$$1200 = Ae^{\frac{1}{6} \ln 64}$$

$$1200 = Ae^{\ln 64^{\frac{1}{6}}}$$

$$1200 = Ae^{\ln 2}$$

$$1200 = A \times 2$$

$$A = 600$$

• $t = \ln 64 \quad \frac{dN}{dt} = 200 \quad N = 1200$

$$200 = k \times 1200$$

$$k = \frac{1}{6}$$

b)

WTFW $t=0, N=1200$

WTFW $t=T, N=3600 \quad (\times 3)$

$$\Rightarrow N = 600e^{\frac{1}{6}t}$$

$$\Rightarrow 3600 = 600e^{\frac{1}{6}t}$$

$$\Rightarrow 6 = e^{\frac{1}{6}t}$$

$$\Rightarrow \ln 6 = \frac{1}{6}t$$

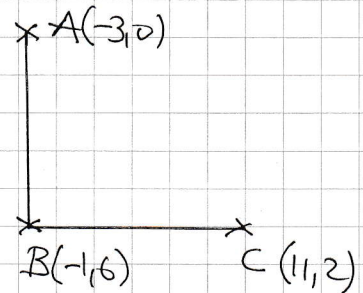
$$\Rightarrow t = 6 \ln 6$$

IXGB - SYNOPTIC PAPER I - QUESTION 8

a) CONSIDERING GRADIENTS

$$\text{GRADIENT } AB = \frac{0-6}{-3-(-1)} = \frac{-6}{-2} = 3$$

$$\text{GRADIENT } BC = \frac{6-2}{-1-11} = \frac{4}{-12} = -\frac{1}{3}$$



AS THESE GRADIENTS ARE NEGATIVE RECIPROCAL
OF EACH OTHER $\hat{A}BC = 90^\circ$

b)

BY A CIRCLE THEOREM IF $\hat{A}BC = 90^\circ$, & ALL 3 POINTS LIE ON THE
CIRCLE, WITH AC BEING A DIAMETER

• D IS THE MIDPOINT OF AC

$$D\left(\frac{-3+11}{2}, \frac{0+2}{2}\right) = D(4,1)$$

• A(-3,0) & D(4,1)

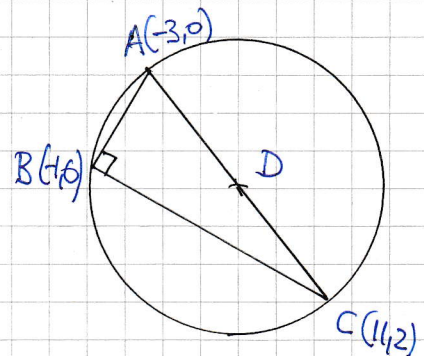
$$r = |AD| = \sqrt{(-3-4)^2 + (0-1)^2} = \sqrt{50}$$

• EQUATION OF CIRCLE IS

$$(x-4)^2 + (y-1)^2 = \sqrt{50}^2$$

$$x^2 - 8x + 16 + y^2 - 2y + 1 = 50$$

$$\underline{x^2 + y^2 - 8x - 2y - 33 = 0}$$



- 1 -

1YGB - SYNOPTIC PAPER J - QUESTION 9

● USING THE SUBSTITUTION GIVEN

$$x = -\frac{1}{2} + \frac{1}{2} \sin \theta$$

$$\underline{\underline{dx = \frac{1}{2} \cos \theta \, d\theta}}$$

● CHANGING THE UNITS

$$\bullet x = 0 \Rightarrow 0 = -\frac{1}{2} + \frac{1}{2} \sin \theta$$

$$\frac{1}{2} = \frac{1}{2} \sin \theta$$

$$\sin \theta = 1$$

$$\underline{\underline{\theta = \frac{\pi}{2}}}$$

$$\bullet x = -\frac{1}{4} \Rightarrow -\frac{1}{4} = -\frac{1}{2} + \frac{1}{2} \sin \theta$$

$$\Rightarrow \frac{1}{4} = \frac{1}{2} \sin \theta$$

$$\Rightarrow \sin \theta = \frac{1}{2}$$

$$\Rightarrow \underline{\underline{\theta = \frac{\pi}{6}}}$$

● TRANSFORMING THE DENOMINATOR OF THE INTEGRAND

$$\sqrt{-x(x+1)} = \sqrt{-\left(-\frac{1}{2} + \frac{1}{2} \sin \theta\right)\left(-\frac{1}{2} + \frac{1}{2} \sin \theta + 1\right)}$$

$$= \sqrt{\left(\frac{1}{2} - \frac{1}{2} \sin \theta\right)\left(\frac{1}{2} + \frac{1}{2} \sin \theta\right)}$$

$$= \sqrt{\frac{1}{4} - \frac{1}{4} \sin^2 \theta}$$

$$= \sqrt{\frac{1}{4}(1 - \sin^2 \theta)}$$

$$= \sqrt{\frac{1}{4} \cos^2 \theta}$$

$$= \underline{\underline{\frac{1}{2} \cos \theta}}$$

YGB - SYNOPTIC PART J - QUESTION 9

● HENCE THE INTEGRAL NOW BECOMES

$$\int_{-\frac{1}{4}}^0 \frac{3}{\sqrt{-2x(x+1)}} dx = \int_{\frac{\pi}{6}}^{\frac{\pi}{2}} \frac{3}{\cancel{\frac{1}{2} \cos \theta}} \left(\frac{1}{2} \cancel{\cos \theta} d\theta \right)$$

$$= \int_{\frac{\pi}{6}}^{\frac{\pi}{2}} 3 d\theta$$

$$= \left[3\theta \right]_{\frac{\pi}{6}}^{\frac{\pi}{2}}$$

$$= \frac{3\pi}{2} - \frac{\pi}{2}$$

$$= \pi$$

LYGB - SYNOPTIC PAPER J - QUESTION 10

USING THE TAN COMPOUND ANGLE IDENTITY & THE PYTHAGOREAN
IDENTITY CONNECTING $\tan^2\theta$ & $\sec^2\theta$

$$\Rightarrow 4 \tan(\theta+60) \tan(\theta-60) = \sec^2\theta - 16$$

$$\Rightarrow 4 \left(\frac{\tan\theta + \tan 60}{1 - \tan\theta \tan 60} \right) \times \left(\frac{\tan\theta - \tan 60}{1 + \tan\theta \tan 60} \right) = (1 + \tan^2\theta) - 16$$

$$\tan 60 = \sqrt{3}$$

$$\Rightarrow \frac{4(\tan\theta + \sqrt{3})}{1 - \sqrt{3}\tan\theta} \times \frac{\tan\theta - \sqrt{3}}{1 + \sqrt{3}\tan\theta} = \tan^2\theta - 15$$

$$\Rightarrow \frac{4(\tan^2\theta - 3)}{1 - 3\tan^2\theta} = \tan^2\theta - 15$$

$$\Rightarrow \frac{4(T - 3)}{1 - 3T} = T - 15, \text{ where } T = \tan\theta$$

$$\Rightarrow 4(T - 3) = (T - 15)(1 - 3T)$$

$$\Rightarrow 4T - 12 = T - 3T^2 - 15 + 45T$$

$$\Rightarrow 3T^2 - 42T + 3 = 0$$

$$\Rightarrow T^2 - 14T + 1 = 0$$

$$\Rightarrow (T - 7)^2 - 48 = 0$$

$$\Rightarrow (T - 7)^2 = 48$$

$$\Rightarrow T - 7 = \pm\sqrt{48}$$

$$\tan(A \pm B) = \frac{\tan A \pm \tan B}{1 \mp \tan A \tan B}$$

$$1 + \tan^2 A = \sec^2 A$$

1YGB - SYNOPTIC PAPER J - QUESTION 10

$$\Rightarrow T = 7 \pm \sqrt{48}$$

$$\Rightarrow \tan^2 \theta = 7 \pm \sqrt{48}$$

$$\Rightarrow \tan \theta = \pm \sqrt{7 \pm \sqrt{48}}$$

INVERTING All 4 POSSIBLE ARGUMENTS

$$\left\{ \begin{array}{l} \theta = 15 \pm 180n \\ \theta = -15 \pm 180n \\ \theta = 75 \pm 180n \\ \theta = -75 \pm 180n \end{array} \right. \quad n = 0, 1, 2, 3, \dots$$

$\therefore \theta = 15^\circ, 75^\circ, 105^\circ, 165^\circ$

- 1 -

IYGB - SYNOPTIC PARSE J - QUESTION 11

a) By inspection $P(0,6)$

$$y = \frac{1}{2}x^2 - 2x + 6$$

$$\frac{dy}{dx} = x - 2$$

$$\left. \frac{dy}{dx} \right|_{x=0} = -2$$

NORMAL GRADIENT = $+\frac{1}{2}$

EQUATION OF L_1 MUST BE

$y = \frac{1}{2}x + 6$

(using $y = mx + c$)

b) $\left. \frac{dy}{dx} \right|_{x=3} = 1 \Rightarrow$ NORMAL GRADIENT MUST BE -1

$$\Rightarrow y - y_0 = m(x - x_0)$$

$$\Rightarrow y - \frac{9}{2} = -1(x - 3)$$

$$\Rightarrow 2y - 9 = -2(x - 3)$$

$$\Rightarrow 2y - 9 = -2x + 6$$

$$\Rightarrow \underline{2x + 2y = 15}$$

FIND THE INTERSECTION BETWEEN L_1 & L_2

$$\left. \begin{array}{l} L_1: y = \frac{1}{2}x + 6 \\ L_2: 2x + 2y = 15 \end{array} \right\} \Rightarrow 2x + 2\left(\frac{1}{2}x + 6\right) = 15$$

$$\Rightarrow 2x + x + 12 = 15$$

$$\Rightarrow 3x = 3$$

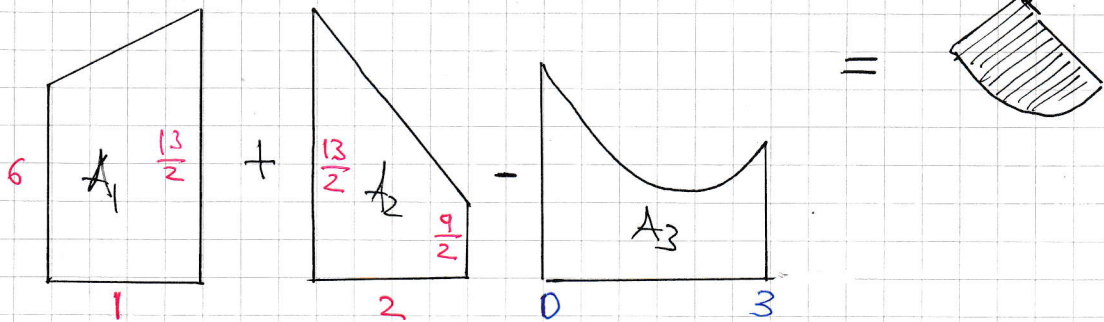
$$\Rightarrow x = 1$$

$$\Rightarrow y = 6\frac{1}{2} = \frac{13}{2}$$

\therefore $\left(1, \frac{13}{2}\right)$

IYGB - SYNOPTIC PAPER 5 - QUESTION 11

LOOKING AT THE DIAGRAM BELOW



$$\bullet A_1 = \frac{\frac{13}{2} + 6}{2} \times 1 = \underline{\frac{25}{4}}$$

$$\bullet A_2 = \frac{\frac{13}{2} + \frac{9}{2}}{2} \times 2 = \underline{11}$$

$$\bullet A_3 = \int_0^3 \left(\frac{1}{2}x^2 - 2x + 6 \right) dx = \left[\frac{1}{6}x^3 - x^2 + 6x \right]_0^3$$

$$= \left(\frac{9}{2} - 9 + 18 \right) - (0) = \underline{\frac{27}{2}}$$

$$\underline{\text{REQUIRED AREA}} = A_1 + A_2 - A_3$$

$$= \frac{25}{4} + 11 - \frac{27}{2}$$

$$= \underline{\underline{\frac{15}{4}}}$$

IYGB - SYNOPSIS PART 5 - QUESTION 12

TAKE "A" TO BE THE ORIGIN.

$$\vec{AP} + 4\vec{BP} + 3\vec{PC} = \vec{0}$$

$$\vec{AP} + 4(\vec{BA} + \vec{AP}) + 3(\vec{PA} + \vec{AC}) = \vec{0}$$

$$\vec{AP} + 4\vec{BA} + 4\vec{AP} + 3\vec{PA} + 3\vec{AC} = \vec{0}$$

$$\vec{AP} + 4\vec{AP} + 3\vec{PA} = -4\vec{BA} - 3\vec{AC}$$

$$\vec{AP} + 4\vec{AP} - 3\vec{AP} = -\vec{BA} - 3\vec{BA} - 3\vec{AC}$$

$$2\vec{AP} = -\vec{BA} - 3(\vec{BA} + \vec{AC})$$

$$2\vec{AP} = -\vec{AB} - 3\vec{BC}$$

$$\vec{AP} = \frac{1}{2}(-\vec{AB} - 3\vec{BC})$$

As required

- 1 -

LYGB - SYNOPTIC PAPER J - QUESTION 13

a) ADDING BY OBTAINING COMMON DENOMINATOR

$$f(x) = 2 + \frac{1}{2x-1} = \frac{2(2x-1)}{(2x-1)} + \frac{1}{2x-1} = \frac{2(2x-1)+1}{2x-1} = \frac{4x-2+1}{2x-1}$$

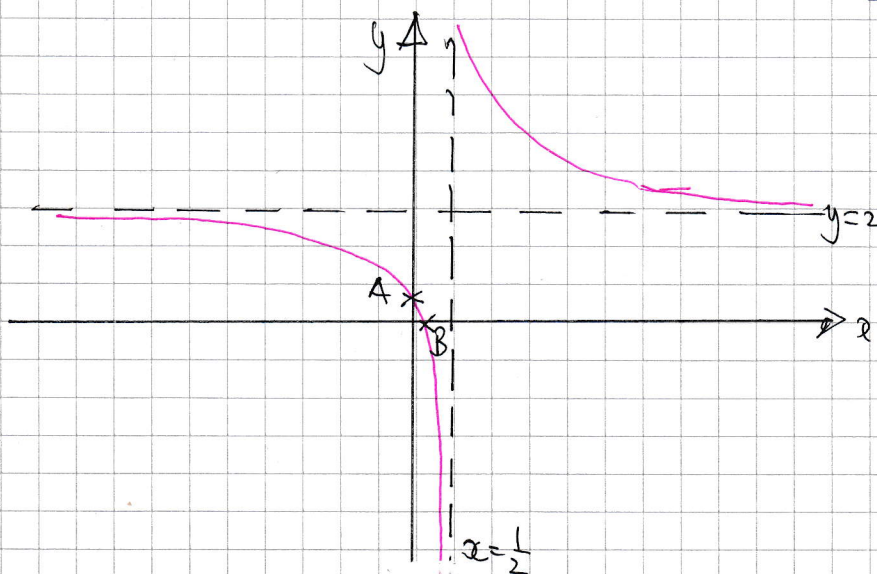
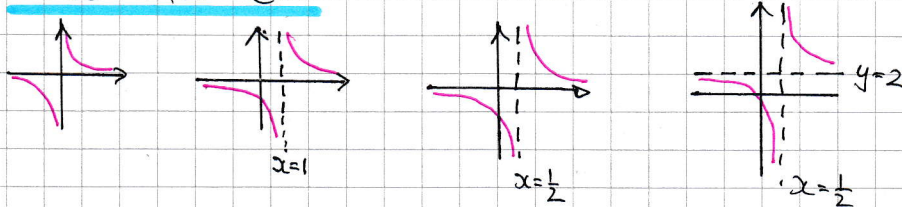
$$\therefore f(x) = \frac{4x-1}{2x-1}$$

b) T_1 : TRANSLATION BY THE VECTOR $\begin{pmatrix} 1 \\ 0 \end{pmatrix}$ " $f(x-1)$ "

T_2 : STRETCH PARALLEL TO THE x AXIS BY SCALE FACTOR $\frac{1}{2}$ " $f(2x)$ "

T_3 : TRANSLATION BY THE VECTOR $\begin{pmatrix} 0 \\ 2 \end{pmatrix}$ " $f(x)+2$ "

c) USING PART (b)



$x=0$
 $y=1 \therefore A(0,1)$
 $y=0$
 $4x-1=0$
 $4x=1$
 $x=\frac{1}{4} \therefore B(\frac{1}{4}, 0)$

d) setting $y=3$

$$\frac{4x-1}{2x-1} = 3$$

$$4x-1 = 6x-3$$

$$2 = 2x$$

$$\therefore (1, 3)$$

IYGB - SYNOPTIC PAPER J - QUESTION 14

$$\underline{\text{GRADIENT AP}} = \frac{p-3k}{p}$$

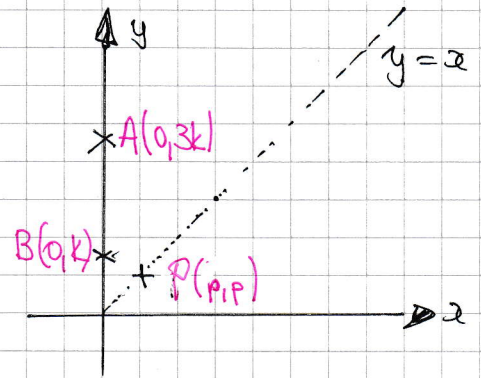
$$\underline{\text{GRADIENT PB}} = \frac{p-k}{p}$$

EQUATION OF AP

$$y = \frac{p-3k}{p}x + 3k$$

EQUATION OF BP

$$y = \frac{p-k}{p}x + k$$



x INTERCEPT OF AP

$$0 = \frac{p-3k}{p}x + 3k$$

$$0 = (p-3k)x + 3kp$$

$$(p-3k)x = -3kp$$

$$x = \frac{-3kp}{p-3k}$$

x INTERCEPT OF BP

$$0 = \frac{p-k}{p}x + k$$

$$0 = (p-k)x + kp$$

$$(p-k)x = -kp$$

$$x = \frac{-kp}{p-k}$$

FINALLY WE HAVE

$$\frac{1}{x_1} - \frac{1}{x_2} = \frac{p-3k}{-3kp} - \frac{p-k}{-kp}$$

$$= \frac{3k-p}{3kp} - \frac{k-p}{kp}$$

$$= \frac{3k-p}{3kp} - \frac{3k-3p}{3kp}$$

$$= \frac{3k-p-3k+3p}{3kp}$$

$$= \frac{2p}{3kp}$$

$$= \frac{2}{3k}$$

AS REQUIRED

- 1 -

1YGB - SYNOPTIC PAPER J - QUESTION 15

$$\text{LET } f(x) = \frac{1}{2-x}$$

$$f(x+h) = \frac{1}{2-(x+h)} = \frac{1}{2-h-x}$$

FROM THE DEFINITION OF THE DERIVATIVE

$$f'(x) = \lim_{h \rightarrow 0} \left[\frac{f(x+h) - f(x)}{h} \right]$$

$$f'(x) = \lim_{h \rightarrow 0} \left[\frac{\frac{1}{2-x-h} - \frac{1}{2-x}}{h} \right]$$

$$f'(x) = \lim_{h \rightarrow 0} \left[\frac{\frac{\cancel{(2-x)} - \cancel{(2-x-h)}}{(2-x-h)(2-x)}}{h} \right]$$

$$f'(x) = \lim_{h \rightarrow 0} \left[\frac{\frac{h}{(2-x)(2-x-h)}}{h} \right]$$

$$f'(x) = \lim_{h \rightarrow 0} \left[\frac{h}{(2-x)(2-x-h)} \doteq h \right]$$

$$f'(x) = \lim_{h \rightarrow 0} \left[\frac{\cancel{h}}{(2-x)(2-x-h)} \times \frac{1}{\cancel{h}} \right]$$

$$f'(x) = \lim_{h \rightarrow 0} \left[\frac{1}{(2-x)(2-x-h)} \right]$$

$$f'(x) = \frac{1}{(2-x)^2}$$

YGB - SYNOPTIC PAPER J - QUESTION 16

a) FORMING A DIFFERENTIAL EQUATION

$$\frac{dh}{dt} = -k h^{\frac{1}{2}}$$

RATE LEAK PROPORTIONAL
 SQAURE ROOT OF HEIGHT

h = HEIGHT OF CHEMICAL (cm)
 t = TIME IN MINUTES
 $t=0, h=100$

$$\left. \frac{dh}{dt} \right|_{\substack{t=0 \\ h=100}} = -0.25$$

APPLY THE CONDITION $\left. \frac{dh}{dt} \right|_{h=100} = -0.25$

$$-0.25 = -k \times 100^{\frac{1}{2}}$$

$$10k = 0.25$$

$$k = \frac{1}{40}$$

$$\therefore \frac{dh}{dt} = -\frac{1}{40} h^{\frac{1}{2}}$$

b) SEPARATING VARIABLES TO OBTAIN

$$\Rightarrow \frac{dh}{dt} = -\frac{1}{40} h^{\frac{1}{2}}$$

$$\Rightarrow dh = -\frac{1}{40} h^{\frac{1}{2}} dt$$

$$\Rightarrow \frac{1}{h^{\frac{1}{2}}} dh = -\frac{1}{40} dt$$

$$\Rightarrow \int h^{-\frac{1}{2}} dh = \int -\frac{1}{40} dt$$

$$\Rightarrow \underline{2h^{\frac{1}{2}}} = -\frac{1}{40}t + C$$

LYGB - SYNOPTIC PAPER - QUESTION 16

APPLY THE CONDITION $t=0$ $h=100$ cm

$$\Rightarrow 2 \times 100^{\frac{1}{2}} = -\frac{1}{40} \times 0 + C$$

$$\Rightarrow C = 20$$

$$\Rightarrow \underline{2h^{\frac{1}{2}} = 20 - \frac{1}{40}t}$$

THE LEAKING STARTED WITH $h=160$ cm

$$\Rightarrow 2 \times \sqrt{160} = 20 - \frac{1}{40}t$$

$$\Rightarrow 80\sqrt{160} = 800 - t$$

$$\Rightarrow t = 800 - 80\sqrt{160}$$

$$\Rightarrow t = -211.92 \dots \text{ minutes}$$

$$\Rightarrow t = -3 \text{ hours } \& \text{ } 32 \text{ minutes, BEFORE } t=0$$

\therefore DRUM HAS BEEN LEAKING FOR 3 hours & 32 minutes

YGB - SYNOPTIC PAPER 5 - QUESTION 17

START COLLECTING AUXILIARY INFORMATION

• when $y=0$

$$\sin t = 0$$

$$t = \begin{cases} 0 & \leftarrow \text{ORIGIN} \\ \pi & \leftarrow \underline{A(\pi^2, 0)} \end{cases}$$

• when $t = \frac{2\pi}{3}$

$$x = \left(\frac{2\pi}{3}\right)^2 = \frac{4}{9}\pi^2$$

$$y = \sin \frac{2\pi}{3} = \frac{\sqrt{3}}{2}$$

$$\underline{P\left(\frac{4}{9}\pi^2, \frac{\sqrt{3}}{2}\right)}$$

FIND THE EQUATION OF THE TANGENT AT P

$$\bullet \frac{dy}{dx} = \frac{dy/dt}{dx/dt} = \frac{\cos t}{2t}$$

$$\bullet \left. \frac{dy}{dx} \right|_{t=\frac{2\pi}{3}} = \frac{\cos \frac{2\pi}{3}}{2 \times \frac{2\pi}{3}} = \frac{-\frac{1}{2}}{\frac{4\pi}{3}} = -\frac{3}{8\pi}$$

$$\bullet y - y_0 = m(x - x_0)$$

$$y - \frac{\sqrt{3}}{2} = -\frac{3}{8\pi} \left(x - \frac{4}{9}\pi^2\right)$$

when $y=0$ (TO FIND B)

$$\Rightarrow -\frac{\sqrt{3}}{2} = -\frac{3}{8\pi} \left(x - \frac{4}{9}\pi^2\right)$$

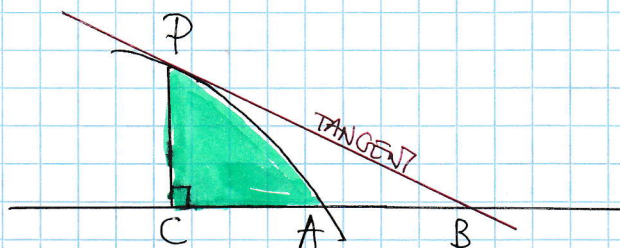
$$\Rightarrow \frac{8\pi\sqrt{3}}{6} = x - \frac{4}{9}\pi^2$$

$$\Rightarrow x = \frac{4}{9}\pi^2 + \frac{4}{3}\pi\sqrt{3}$$

$$\therefore \underline{B\left(\frac{4}{9}\pi^2 + \frac{4}{3}\pi\sqrt{3}, 0\right)}$$

1YGB - SYNOPTIC PAPER J - QUESTION 17

LOOKING AT THE DIAGRAM BELOW



$$\bullet |PC| = \frac{\sqrt{3}}{2}$$

$$\bullet |BC| = \left(\frac{4}{3}\pi^2 + \frac{4}{3}\pi\sqrt{3} \right) - \frac{4}{3}\pi^2 = \frac{4}{3}\sqrt{3}\pi$$

① AREA OF $\triangle BCP = \frac{1}{2} |PC| |BC| = \frac{1}{2} \times \frac{\sqrt{3}}{2} \times \frac{4}{3}\sqrt{3}\pi = \underline{\underline{\pi}}$

② AREA UNDER THE PARAMETRIC CURVE (SHOWN IN GREEN)

$$\begin{aligned} \text{AREA} &= \int_{x_c}^{x_A} y(x) dx = \int_{t_p}^{t_A} y(t) \frac{dx}{dt} dt \\ &= \int_{\frac{2}{3}\pi}^{\pi} (\sin t)(2t) dt = \int_{\frac{2}{3}\pi}^{\pi} 2t \sin t dt \end{aligned}$$

INTEGRATION BY PARTS

$$\begin{aligned} \dots &= \left[-2t \cos t \right]_{\frac{2}{3}\pi}^{\pi} - \int_{\frac{2}{3}\pi}^{\pi} -2 \cos t dt \\ &= \left[-2t \cos t \right]_{\frac{2}{3}\pi}^{\pi} + \int_{\frac{2}{3}\pi}^{\pi} 2 \cos t dt \\ &= \left[2 \sin t - 2t \cos t \right]_{\frac{2}{3}\pi}^{\pi} \\ &= (0 + 2\pi) - \left(\sqrt{3} + \frac{2\pi}{3} \right) = \underline{\underline{\frac{4}{3}\pi - \sqrt{3}}} \end{aligned}$$

2t	2
-cos t	sin t

FINALLY THE REQUIRED AREA

$$\pi - \left(\frac{4}{3}\pi - \sqrt{3} \right) = -\frac{\pi}{3} + \sqrt{3} = \underline{\underline{\frac{1}{3}(3\sqrt{3} - \pi)}}$$

YGB - SYNOPSIS PAPER J - QUESTION 18

START BY FACTORIZING THE EXPRESSION

$$f(k) = k^3 + 2k = k(k^2 + 2)$$

THE POSITIVE INTEGER k HAS ONE OF THE FOLLOWING THREE FORMS

$$k = 3n, 3n+1, 3n+2$$

EXAMINING EACH CASE

- $f(3n) = 3n(9n^2 + 2) = 3[n(9n^2 + 2)]$
- $f(3n+1) = (3n+1)[(3n+1)^2 + 2] = (3n+1)(9n^2 + 6n + 1 + 2)$
 $= (3n+1)(9n^2 + 6n + 3) = 3(3n+1)(3n^2 + 2n + 1)$
- $f(3n+2) = (3n+2)[(3n+2)^2 + 2] = (3n+2)(9n^2 + 12n + 4 + 2)$
 $= (3n+2)(9n^2 + 12n + 6) = 3(3n+2)(3n^2 + 4n + 2)$

∴ BY EXHAUSTION $f(k) = k^3 + 2k$ IS A MULTIPLE OF 3, $k \in \mathbb{N}$

- 1 -

1XGB - SYNOPSIS PART J - QUESTION 19

SPIT THE SUMMATION AS FOLLOWS

$$\begin{aligned}\sum_{n=1}^{\infty} \left[\frac{3^n - 2}{4^{n+1}} \right] &= \sum_{n=1}^{\infty} \left[\frac{3^n}{4^{n+1}} - \frac{2}{4^{n+1}} \right] = \sum_{n=1}^{\infty} \left[\frac{3^n}{4^{n+1}} \right] - \sum_{n=1}^{\infty} \left[\frac{2}{4^{n+1}} \right] \\ &= \sum_{n=1}^{\infty} \left[\frac{3^n}{4 \times 4^n} \right] - \sum_{n=1}^{\infty} \left[\frac{2}{4 \times 4^n} \right] \\ &= \frac{1}{4} \sum_{n=1}^{\infty} \left(\frac{3}{4} \right)^n - \frac{1}{2} \sum_{n=1}^{\infty} \left(\frac{1}{4} \right)^n\end{aligned}$$

↑	↑
THIS IS A G.P.	THIS IS A G.P.
$a = \frac{3}{4}$	$a = \frac{1}{4}$
$r = \frac{3}{4}$	$r = \frac{1}{4}$
$S_{\infty} = \frac{\frac{3}{4}}{1 - \frac{3}{4}}$	$S_{\infty} = \frac{\frac{1}{4}}{1 - \frac{1}{4}}$
$S_{\infty} = 3$	$S_{\infty} = \frac{1}{3}$

PUTTING ALL THE RESULTS TOGETHER

$$\sum_{n=1}^{\infty} \left[\frac{3^n - 2}{4^{n+1}} \right] = \frac{1}{4} \times 3 - \frac{1}{2} \times \frac{1}{3} = \frac{3}{4} - \frac{1}{6} = \frac{7}{12}$$

- 1 -

1YGB - SYNOPTIC PAPER J - QUESTION 20

a) SUPPOSE THAT

$$\begin{aligned}\sqrt{6+2\sqrt{6}} &\leq \sqrt{3} + \sqrt{2} \\ \Rightarrow 6 + 2\sqrt{6} &\leq (\sqrt{3} + \sqrt{2})^2 \\ \Rightarrow 6 + 2\sqrt{6} &\leq 3 + 2\sqrt{6} + 2 \\ \Rightarrow 6 &\leq 5\end{aligned}$$

WHICH IS A CONTRADICTION

$$\therefore \underline{\sqrt{6+2\sqrt{6}} > \sqrt{3} + \sqrt{2}}$$

b) SUPPOSE THAT

$$\begin{aligned}\sqrt[3]{3} &\leq \sqrt{2} \\ \Rightarrow 3^{\frac{1}{3}} &\leq 2^{\frac{1}{2}} \\ \Rightarrow (3^{\frac{1}{3}})^6 &\leq (2^{\frac{1}{2}})^6 \\ \Rightarrow 3^2 &\leq 2^3 \\ \Rightarrow 9 &\leq 8\end{aligned}$$

THIS IS A CONTRADICTION

$$\therefore \underline{\sqrt[3]{3} > \sqrt{2}}$$

c) SUPPOSE THAT

$$\begin{aligned}\sqrt{2}-1 &\leq \sqrt{3}-\sqrt{2} \\ \Rightarrow 2\sqrt{2} &\leq \sqrt{3}+1 \\ \Rightarrow 8 &\leq (\sqrt{3}+1)^2 \\ \Rightarrow 8 &\leq 3+2\sqrt{3}+1 \\ \Rightarrow &\leq 2\sqrt{3} \\ \Rightarrow 2 &\leq \sqrt{3}\end{aligned}$$

YGB - SYNOPTIC PAPER J - QUESTION 20

$$\Rightarrow 4 \leq 3$$

THIS IS A CONTRADICTION

$$\therefore \sqrt{2}-1 > \sqrt{3}-\sqrt{2}$$

ALTERNATIVE APPROACH BASED ON

IF $a > b > 0 \Rightarrow a^n > b^n$ FOR $n=1, 2, 3, 4, \dots$

a) $\sqrt{6+2\sqrt{6}}$ SQUARES TO $6+2\sqrt{6}$
 $(\sqrt{3} + \sqrt{2})^2 = 3 + 2\sqrt{6} + 2 = 5 + 2\sqrt{6}$

$$\therefore \sqrt{6+2\sqrt{6}} > \sqrt{3} + \sqrt{2}$$

b) $\sqrt[3]{3} = 3^{\frac{1}{3}}$ & $(3^{\frac{1}{3}})^6 = 3^2 = 9$
 $\sqrt{2} = 2^{\frac{1}{2}}$ & $(2^{\frac{1}{2}})^6 = 2^3 = 8$

$$\therefore \sqrt[3]{3} > \sqrt{2}$$

1Y08 - SYNOPTIC PAPER 3 - QUESTION 21

PROCEED AS FOLLOWS

$$\Rightarrow 2 + 4\cos^2\theta = 7\cos\theta\sin\theta$$

$$\Rightarrow 2(\cos^2\theta + \sin^2\theta) + 4\cos^2\theta = 7\cos\theta\sin\theta$$

$$\Rightarrow 6\cos^2\theta - 7\cos\theta\sin\theta + 2\sin^2\theta = 0$$

FACTORIZE THE QUADRATIC EXPRESSION

$$\Rightarrow (3\cos\theta - 2\sin\theta)(2\cos\theta - \sin\theta) = 0$$

HENCE WE OBTAIN TWO EQUATIONS

$$\Rightarrow 3\cos\theta - 2\sin\theta = 0$$

$$\Rightarrow 3\cos\theta = 2\sin\theta$$

$$\Rightarrow \frac{3\cos\theta}{\cos\theta} = \frac{2\sin\theta}{\cos\theta}$$

$$\Rightarrow 3 = 2\tan\theta$$

$$\Rightarrow \tan\theta = \frac{3}{2}$$

$$\arctan\left(\frac{3}{2}\right) = 56.3^\circ$$

$$\Rightarrow \theta = 56.3 \pm 180n \quad n=1,3,3,\dots$$

$$\Rightarrow 2\cos\theta - \sin\theta = 0$$

$$\Rightarrow 2\cos\theta = \sin\theta$$

$$\Rightarrow \frac{2\cos\theta}{\cos\theta} = \frac{\sin\theta}{\cos\theta}$$

$$\Rightarrow 2 = \tan\theta$$

$$\arctan(2) = 63.4^\circ$$

$$\Rightarrow \theta = 63.4 \pm 180n \quad n=0,1,3,3,\dots$$

Arrows from the two equations point to the final result:

$$\theta = 56.3^\circ, 63.4^\circ, 236.3^\circ, 243.4^\circ$$

ALTERNATIVE APPROACH USING MINOR TRIG RATIOS AS FOLLOWS

$$\Rightarrow 2 + 4\cos^2\theta = 7\cos\theta\sin\theta$$

$$\Rightarrow \frac{2}{\cos^2\theta} + \frac{4\cos^2\theta}{\cos^2\theta} = \frac{7\cos\theta\sin\theta}{\cos^2\theta}$$

-2-

IVGB - SYNOPSIS PAPER 1 - QUESTION 21

$$\Rightarrow 2\sec^2\theta + 4 = 7\tan\theta$$

$$\Rightarrow 2(1 + \tan^2\theta) + 4 = 7\tan\theta$$

$$\Rightarrow 2 + 2\tan^2\theta + 4 = 7\tan\theta$$

$$\Rightarrow 2\tan^2\theta - 7\tan\theta + 6 = 0$$

$$\Rightarrow (2\tan\theta - 3)(\tan\theta - 2) = 0$$

$$\Rightarrow \tan\theta = \begin{cases} 3/2 \\ 2 \end{cases}$$

ETC . E.T.C AS WITH THE PREVIOUS METHOD